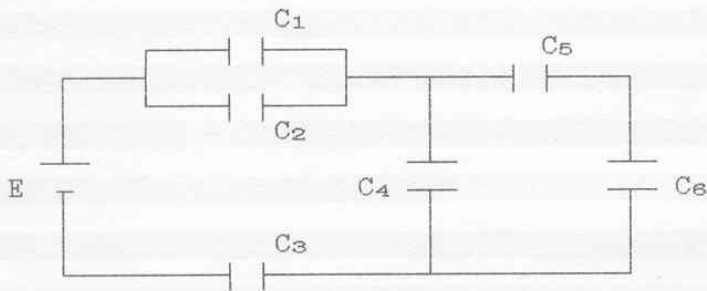


2.1 - Del circuito di figura determinare:

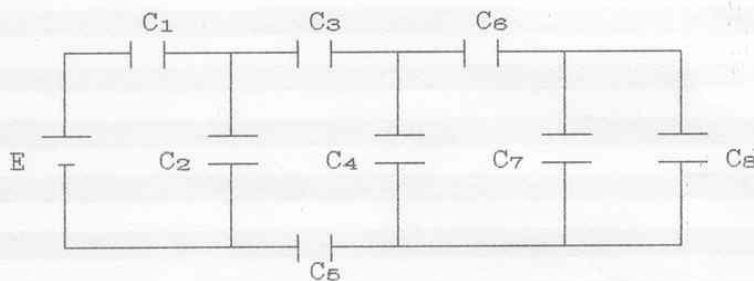
- 1.- la capacità totale;
- 2.- la carica complessivamente erogata dal generatore;
- 3.- la carica e la differenza di potenziale su ogni capacità.



$$\begin{aligned}
 E &= 400V & ; & & C_1 &= 20\mu F \\
 C_2 &= 40\mu F & ; & & C_3 &= 60\mu F \\
 C_4 &= 9\mu F & ; & & C_5 &= 30\mu F \\
 C_6 &= 70\mu F
 \end{aligned}$$

2.2 - Del circuito di figura determinare:

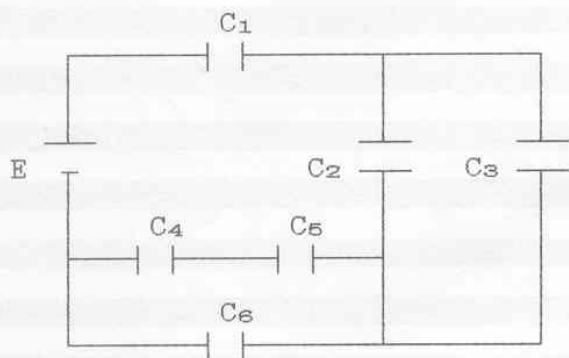
- 1.- la capacità totale;
- 2.- la carica complessivamente erogata dal generatore;
- 3.- la carica e la differenza di potenziale su ogni capacità.



$$\begin{aligned}
 E &= 200V & ; & & C_1 &= 60\mu F \\
 C_2 &= 10\mu F & ; & & C_3 &= 90\mu F \\
 C_4 &= 25\mu F & ; & & C_5 &= 30\mu F \\
 C_6 &= 30\mu F \\
 C_7 &= C_8 &= & 120\mu F
 \end{aligned}$$

2.3 - Del circuito di figura determinare:

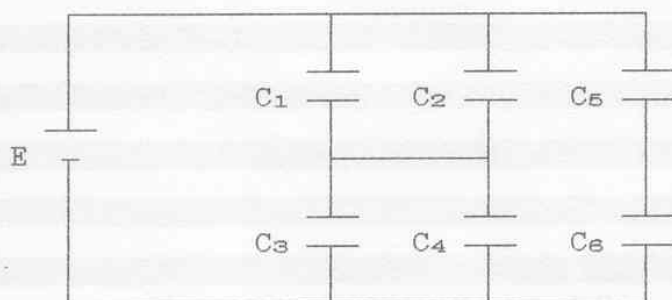
- 1.- la capacità totale;
- 2.- la carica complessivamente erogata dal generatore;
- 3.- la carica e la differenza di potenziale su ogni capacità.



$$\begin{aligned}
 E &= 100V & ; & & C_1 &= 18\mu F \\
 C_2 &= 10\mu F & ; & & C_3 &= 8\mu F \\
 C_4 &= 20\mu F & ; & & C_5 &= 12\mu F \\
 C_6 &= 10,5\mu F
 \end{aligned}$$

2.4 - Del circuito di figura determinare:

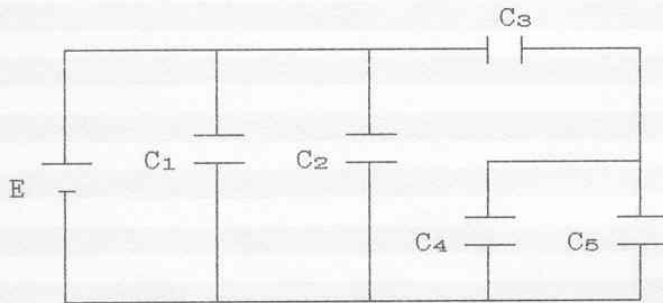
- 1.- la capacità totale;
- 2.- la carica complessivamente erogata dal generatore;
- 3.- la carica e la differenza di potenziale su ogni capacità.



$$\begin{aligned}
 E &= 100V & ; & & C_1 &= 12\mu F \\
 C_2 &= 6\mu F & ; & & C_3 &= 10\mu F \\
 C_4 &= 8\mu F & ; & & C_5 &= 20\mu F \\
 C_6 &= 12\mu F
 \end{aligned}$$

2.5 - Del circuito di figura determinare:

- 1.- la capacità totale;
- 2.- la carica complessivamente erogata dal generatore;
- 3.- la carica e la differenza di potenziale su ogni capacità.



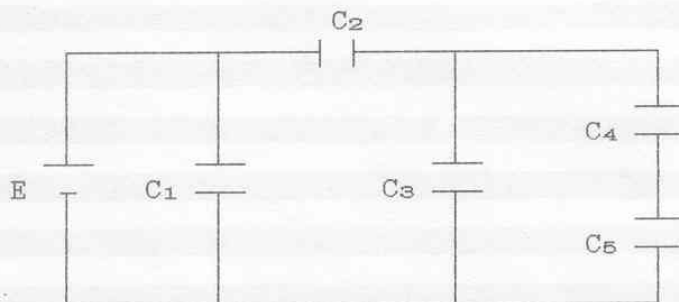
$$E = 10V \quad ; \quad C_1 = 1,4\mu F$$

$$C_2 = 2,1\mu F \quad ; \quad C_3 = 3,5\mu F$$

$$C_4 = 1,2\mu F \quad ; \quad C_5 = 1,3\mu F$$

2.6 - Del circuito di figura determinare:

- 1.- la capacità totale;
- 2.- la carica complessivamente erogata dal generatore;
- 3.- la carica e la differenza di potenziale su ogni capacità.



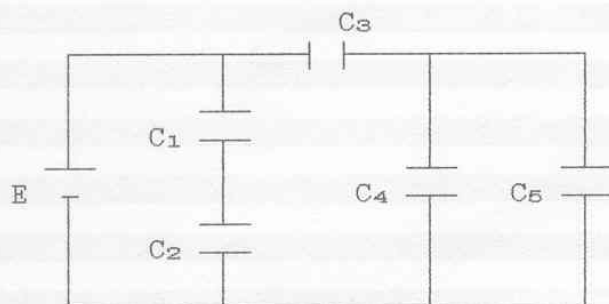
$$E = 100V \quad ; \quad C_1 = 4\mu F$$

$$C_2 = 12\mu F \quad ; \quad C_3 = 8\mu F$$

$$C_4 = 12\mu F \quad ; \quad C_5 = 6\mu F$$

2.7 - Del circuito di figura determinare:

- 1.- la capacità totale;
- 2.- la carica complessivamente erogata dal generatore;
- 3.- la carica e la differenza di potenziale su ogni capacità.



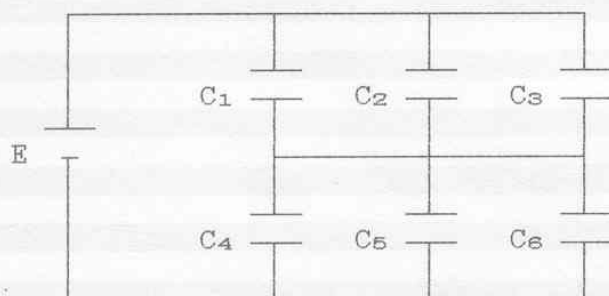
$$E = 200V \quad ; \quad C_1 = 8\mu F$$

$$C_2 = 12\mu F \quad ; \quad C_3 = 8\mu F$$

$$C_4 = 20\mu F \quad ; \quad C_5 = 5\mu F$$

2.8 - Del circuito di figura determinare:

- 1.- la capacità totale;
- 2.- la carica complessivamente erogata dal generatore;
- 3.- la carica e la differenza di potenziale su ogni capacità.



$$E = 100V \quad ; \quad C_1 = 1,2\mu F$$

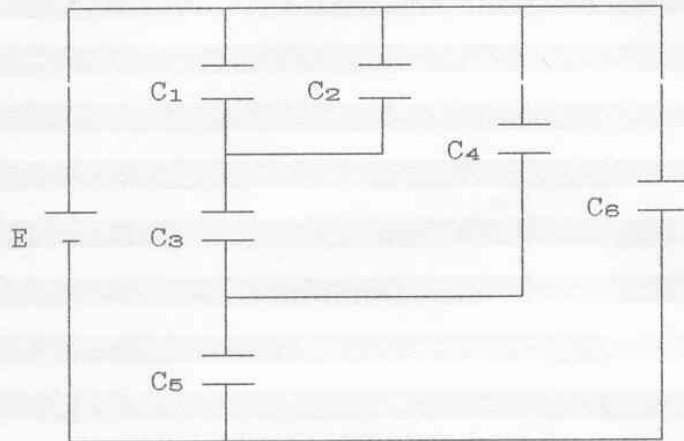
$$C_2 = 1,3\mu F \quad ; \quad C_3 = 2,5\mu F$$

$$C_4 = 1,4\mu F \quad ; \quad C_5 = 2,1\mu F$$

$$C_6 = 2,5\mu F$$

2.9 - Del circuito di figura determinare:

- 1.- la capacità totale;
- 2.- la carica complessivamente erogata dal generatore;
- 3.- la carica e la differenza di potenziale su ogni capacità.



$$E = 100V$$

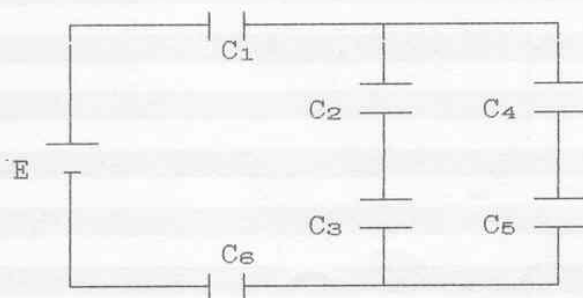
$$C_1 = C_2 = C_4 = 0,5nF$$

$$C_3 = C_5 = 1nF$$

$$C_6 = 2nF$$

2.10 - Del circuito di figura determinare:

- 1.- la capacità totale;
- 2.- la carica complessivamente erogata dal generatore;
- 3.- la carica e la differenza di potenziale su ogni capacità.



$$E = 100V \quad ; \quad C_1 = 12\mu F$$

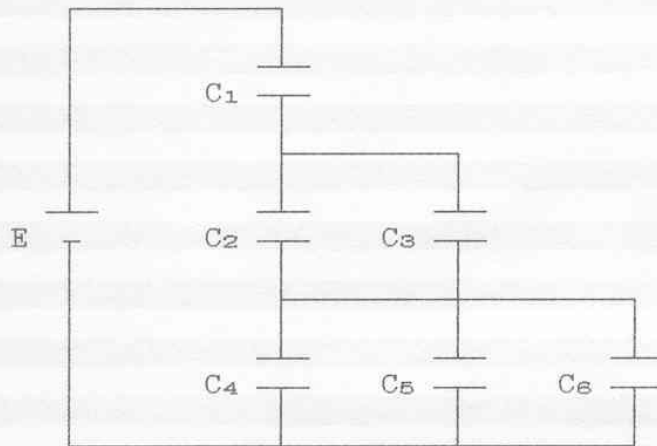
$$C_2 = 180\mu F \quad ; \quad C_3 = 20\mu F$$

$$C_4 = C_5 = 60\mu F$$

$$C_6 = 2,4\mu F$$

2.11 - Del circuito di figura determinare:

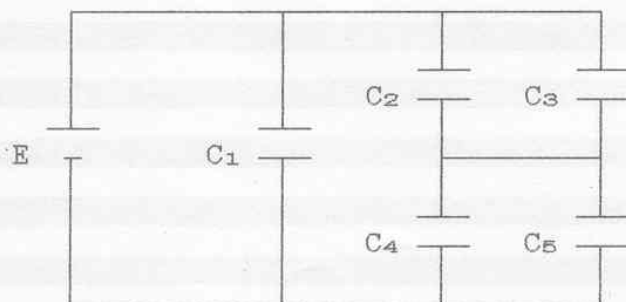
- 1.- la capacità totale;
- 2.- la carica complessivamente erogata dal generatore;
- 3.- la carica e la differenza di potenziale su ogni capacità.



$$\begin{aligned}
 E &= 62,5V & ; & & C_1 &= 10nF \\
 C_2 &= 15nF & ; & & C_3 &= 5nF \\
 C_4 &= 3nF & ; & & C_5 &= 5nF \\
 C_6 &= 2nF
 \end{aligned}$$

2.12 - Del circuito di figura determinare:

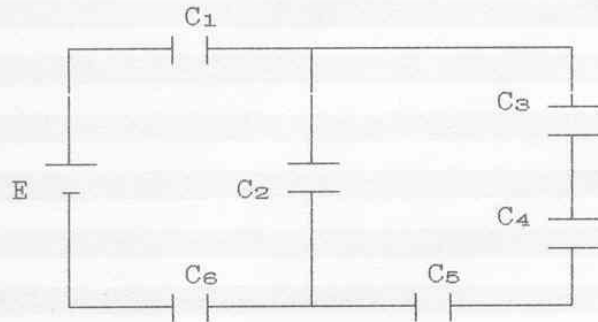
- 1.- la capacità totale;
- 2.- la carica complessivamente erogata dal generatore;
- 3.- la carica e la differenza di potenziale su ogni capacità.



$$\begin{aligned}
 E &= 100V & ; & & C_1 &= 1,75\mu F \\
 C_2 &= 1,2\mu F & ; & & C_3 &= 1,3\mu F \\
 C_4 &= 1,4\mu F & ; & & C_5 &= 2,1\mu F
 \end{aligned}$$

2.13 - Del circuito di figura determinare:

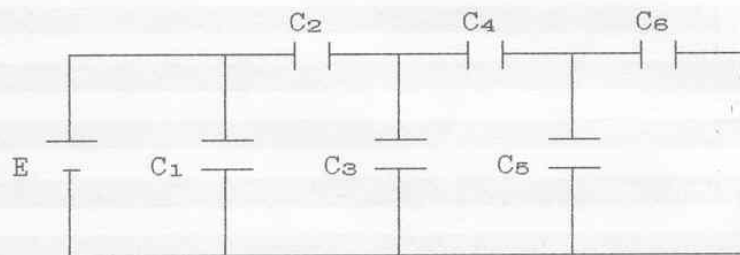
- 1.- la capacità totale;
- 2.- la carica complessivamente erogata dal generatore;
- 3.- la carica e la differenza di potenziale su ogni capacità.



$E = 10V$; $C_1 = 30\mu F$
 $C_2 = 1,85\mu F$; $C_3 = 18\mu F$
 $C_4 = 6\mu F$; $C_5 = 10,5\mu F$
 $C_6 = 30\mu F$

2.14 - Del circuito di figura determinare:

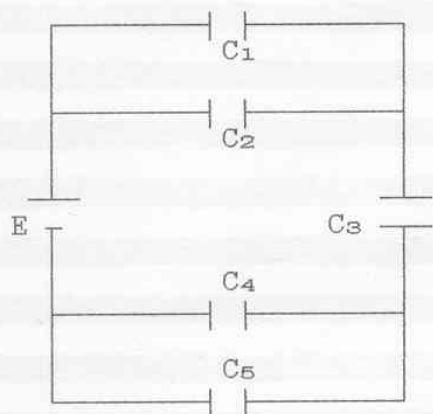
- 1.- la capacità totale;
- 2.- la carica complessivamente erogata dal generatore;
- 3.- la carica e la differenza di potenziale su ogni capacità.



$E = 10V$
 $C_1 = C_3 = C_5 = C_6 = 1pF$
 $C_2 = C_4 = 2pF$

2.15 - Del circuito di figura determinare:

- 1.- la capacità totale;
- 2.- la carica complessivamente erogata dal generatore;
- 3.- la carica e la differenza di potenziale su ogni capacità.



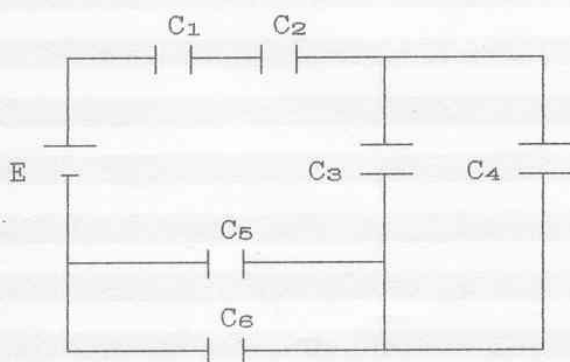
$$E = 10V \quad ; \quad C_1 = 12nF$$

$$C_2 = 8nF \quad ; \quad C_3 = 10nF$$

$$C_4 = 12nF \quad ; \quad C_5 = 13nF$$

2.16 - Del circuito di figura determinare:

- 1.- la capacità totale;
- 2.- la carica complessivamente erogata dal generatore;
- 3.- la carica e la differenza di potenziale su ogni capacità.



$$E = 10V$$

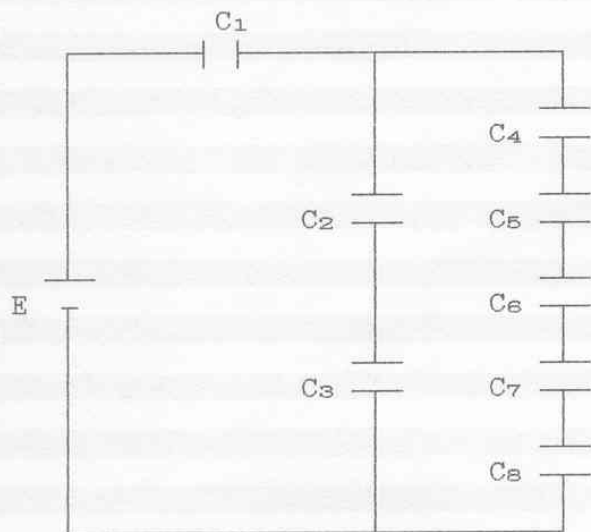
$$C_1 = C_2 = 20\mu F$$

$$C_3 = 12\mu F \quad ; \quad C_4 = 6\mu F$$

$$C_5 = 10\mu F \quad ; \quad C_6 = 8\mu F$$

2.17 - Del circuito di figura determinare:

- 1.- la capacità totale;
- 2.- la carica complessivamente erogata dal generatore;
- 3.- la carica e la differenza di potenziale su ogni capacità.



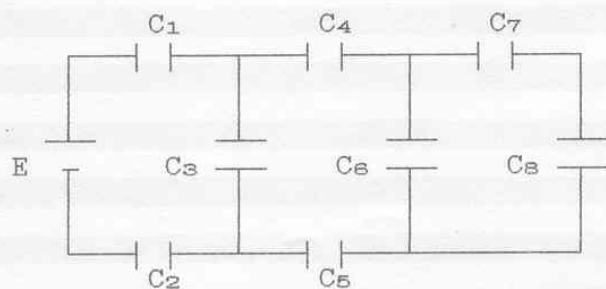
$$E = 300 \text{ V} \quad ; \quad C_1 = 8 \text{ nF}$$

$$C_2 = 3,6 \text{ nF} \quad ; \quad C_3 = 2,4 \text{ nF}$$

$$C_4 = C_5 = C_6 = C_7 = C_8 = 7,8 \text{ nF}$$

2.18 - Del circuito di figura determinare:

- 1.- la capacità totale;
- 2.- la carica complessivamente erogata dal generatore;
- 3.- la carica e la differenza di potenziale su ogni capacità.



$$E = 100 \text{ V} \quad ; \quad C_1 = 7 \mu\text{F}$$

$$C_2 = 8 \mu\text{F} \quad ; \quad C_3 = 6 \mu\text{F}$$

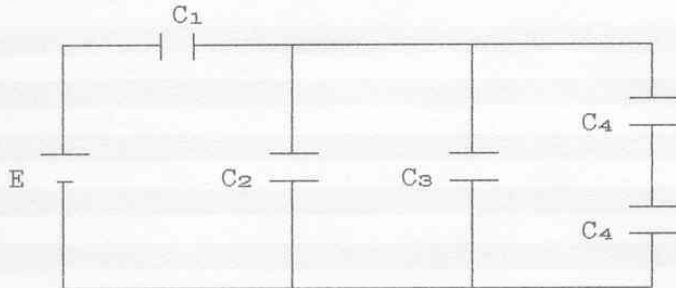
$$C_4 = 4 \mu\text{F} \quad ; \quad C_5 = 5 \mu\text{F}$$

$$C_6 = 3 \mu\text{F} \quad ; \quad C_7 = 2 \mu\text{F}$$

$$C_8 = 1 \mu\text{F}$$

2.19 - Del circuito di figura determinare:

- 1.- la capacità totale;
- 2.- la carica complessivamente erogata dal generatore;
- 3.- la carica e la differenza di potenziale su ogni capacità.



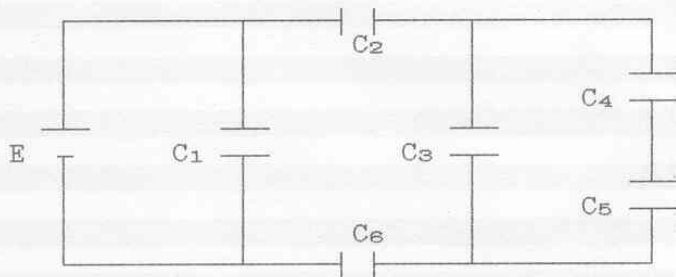
$$E = 100 \text{ V} \quad ; \quad C_1 = 120 \text{ } \mu\text{F}$$

$$C_2 = 30 \text{ } \mu\text{F} \quad ; \quad C_3 = 50 \text{ } \mu\text{F}$$

$$C_4 = C_5 = 40 \text{ } \mu\text{F}$$

2.20 - Del circuito di figura determinare:

- 1.- la capacità totale;
- 2.- la carica complessivamente erogata dal generatore;
- 3.- la carica e la differenza di potenziale su ogni capacità.



$$E = 100 \text{ V} \quad ; \quad C_1 = 20 \text{ } \mu\text{F}$$

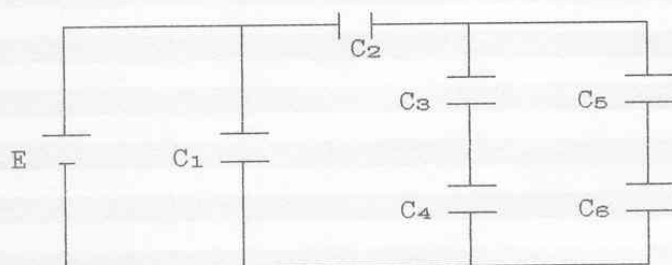
$$C_2 = 30 \text{ } \mu\text{F} \quad ; \quad C_3 = 22 \text{ } \mu\text{F}$$

$$C_4 = 180 \text{ } \mu\text{F} \quad ; \quad C_5 = 20 \text{ } \mu\text{F}$$

$$C_6 = 10 \text{ } \mu\text{F}$$

2.21 - Del circuito di figura determinare:

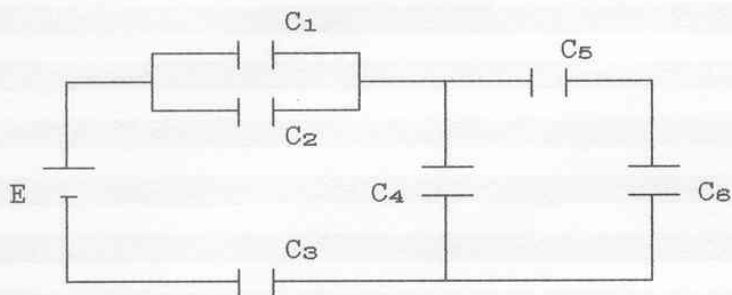
- 1.- la capacità totale;
- 2.- la carica complessivamente erogata dal generatore;
- 3.- la carica e la differenza di potenziale su ogni capacità.



$$\begin{aligned} E &= 100 \text{ V} & ; & & C_1 &= 12 \text{ } \mu\text{F} \\ C_2 &= 30 \text{ } \mu\text{F} & ; & & C_3 &= 180 \text{ } \mu\text{F} \\ C_4 &= 20 \text{ } \mu\text{F} & ; & & C_5 &= 60 \text{ } \mu\text{F} \\ C_6 &= 60 \text{ } \mu\text{F} \end{aligned}$$


2.1 - Del circuito di figura determinare:

- 1.- la capacità totale;
- 2.- la carica complessivamente erogata dal generatore;
- 3.- la carica e la differenza di potenziale su ogni capacità.



$E = 400V$; $C_1 = 20\mu F$
 $C_2 = 40\mu F$; $C_3 = 60\mu F$
 $C_4 = 9\mu F$; $C_5 = 30\mu F$
 $C_6 = 70\mu F$

1.-



$$C_{56} = \frac{C_5 * C_6}{C_5 + C_6} = \frac{30 \cdot 10^{-6} * 70 \cdot 10^{-6}}{30 \cdot 10^{-6} + 70 \cdot 10^{-6}} = 21 \mu F$$

$$C_{12} = C_1 + C_2 = 20 \cdot 10^{-6} + 40 \cdot 10^{-6} = 60 \mu F$$

$$C_{46} = C_4 + C_{56} = 9 \cdot 10^{-6} + 21 \cdot 10^{-6} = 30 \mu F$$

$$C_T = \frac{1}{\frac{1}{C_{12}} + \frac{1}{C_3} + \frac{1}{C_{46}}} = \frac{1}{\frac{1}{60 \cdot 10^{-6}} + \frac{1}{60 \cdot 10^{-6}} + \frac{1}{30 \cdot 10^{-6}}} = 15 \mu F$$

2.-

$$Q_T = C_T * E = 15 * 10^{-6} * 400 = 6000 \mu\text{C}$$

3.-

$$Q_3 = Q_{12} = Q_{46} = Q_T = 6000 \mu\text{C} \quad ; \quad V_3 = \frac{Q_3}{C_3} = \frac{6000 * 10^{-6}}{60 * 10^{-6}} = 100 \text{ V}$$

$$V_1 = V_2 = \frac{Q_{12}}{C_{12}} = \frac{6000 * 10^{-6}}{60 * 10^{-6}} = 100 \text{ V}$$

$$Q_1 = C_1 * V_1 = 20 * 10^{-6} * 100 = 2000 \mu\text{C}$$

$$Q_2 = Q_T - Q_1 = 6000 * 10^{-6} - 2000 * 10^{-6} = 4000 \mu\text{C}$$

$$V_4 = V_{46} = V_{56} = E - V_1 - V_3 = 400 - 100 - 100 = 200 \text{ V}$$

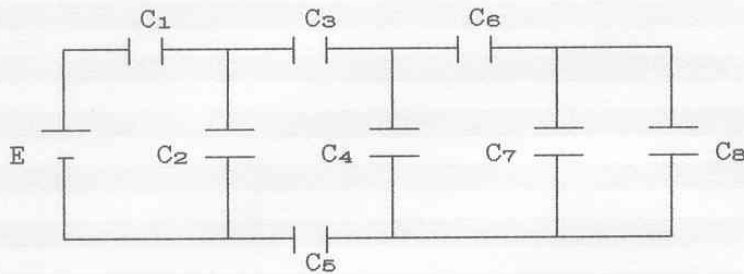
$$Q_4 = C_4 * V_4 = 9 * 10^{-6} * 200 = 1800 \mu\text{C}$$

$$Q_5 = Q_6 = Q_{56} = Q_T - Q_4 = 6000 * 10^{-6} - 1800 * 10^{-6} = 4200 \mu\text{C}$$

$$V_5 = \frac{Q_5}{C_5} = \frac{4200 * 10^{-6}}{30 * 10^{-6}} = 140 \text{ V} \quad ; \quad V_6 = \frac{Q_6}{C_6} = \frac{4200 * 10^{-6}}{70 * 10^{-6}} = 60 \text{ V}$$

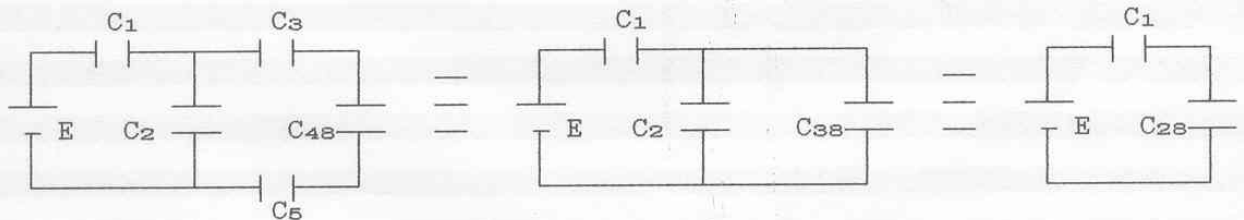
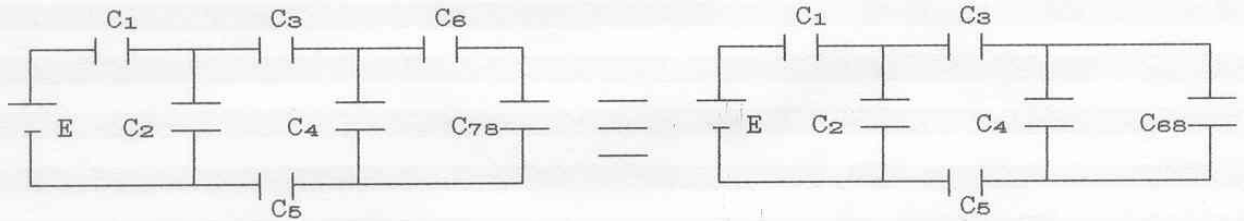
2.2 - Del circuito di figura determinare:

- 1.- la capacità totale;
- 2.- la carica complessivamente erogata dal generatore;
- 3.- la carica e la differenza di potenziale su ogni capacità.



$$\begin{aligned}
 E &= 200V & ; & & C_1 &= 60\mu F \\
 C_2 &= 10\mu F & ; & & C_3 &= 90\mu F \\
 C_4 &= 25\mu F & ; & & C_5 &= 30\mu F \\
 C_6 &= 30\mu F \\
 C_7 &= C_8 &= & & 120\mu F
 \end{aligned}$$

1.-



$$C_{78} = C_7 + C_8 = 120 \cdot 10^{-6} + 120 \cdot 10^{-6} = 240 \mu F$$

$$C_{68} = \frac{C_6 * C_{78}}{C_6 + C_{78}} = \frac{30 \cdot 10^{-6} * 240 \cdot 10^{-6}}{30 \cdot 10^{-6} + 240 \cdot 10^{-6}} = 26,67 \mu F$$

$$C_{48} = C_4 + C_{68} = 25 \cdot 10^{-6} + 26,67 \cdot 10^{-6} = 51,67 \mu F$$

$$C_{38} = \frac{1}{\frac{1}{C_3} + \frac{1}{C_{48}} + \frac{1}{C_5}} = \frac{1}{\frac{1}{90 \cdot 10^{-6}} + \frac{1}{51,67 \cdot 10^{-6}} + \frac{1}{30 \cdot 10^{-6}}} = 15,67 \mu F$$

$$C_{28} = C_2 + C_{38} = 10 \cdot 10^{-6} + 15,67 \cdot 10^{-6} = 25,67 \text{ } \mu\text{F}$$

$$C_T = \frac{C_1 * C_{28}}{C_1 + C_{28}} = \frac{60 \cdot 10^{-6} * 25,67 \cdot 10^{-6}}{60 \cdot 10^{-6} + 25,67 \cdot 10^{-6}} = 17,98 \text{ } \mu\text{F}$$

2.-

$$Q_T = C_T * E = 17,98 \cdot 10^{-6} * 200 = 3,596 \text{ mC}$$

3.-

$$Q_1 = Q_{28} = Q_T = 3,596 \text{ mC} \quad ; \quad V_1 = \frac{Q_1}{C_1} = \frac{3,596 \cdot 10^{-3}}{60 \cdot 10^{-6}} = 59,93 \text{ V}$$

$$V_{28} = E - V_1 = 200 - 59,93 = 140,07 \text{ V} \approx 140 \text{ V}$$

$$V_2 = V_{38} = V_{28} = 140 \text{ V} \quad ; \quad Q_2 = C_2 * V_2 = 10 \cdot 10^{-6} * 140 = 1,4 \text{ mC}$$

$$Q_{38} = Q_T - Q_2 = 3,596 \cdot 10^{-3} - 1,4 \cdot 10^{-3} = 2,196 \text{ mC}$$

$$Q_3 = Q_5 = Q_{48} = Q_{38} = 2,196 \text{ mC} \quad ; \quad V_3 = \frac{Q_3}{C_3} = \frac{2,196 \cdot 10^{-3}}{90 \cdot 10^{-6}} = 24,4 \text{ V}$$

$$V_5 = \frac{Q_5}{C_5} = \frac{2,196 \cdot 10^{-3}}{30 \cdot 10^{-6}} = 73,2 \text{ V}$$

$$V_{48} = V_{38} - V_3 - V_5 = 140 - 24,4 - 73,2 = 42,4 \text{ V}$$

$$V_4 = V_{68} = V_{48} = 42,4 \text{ V} \quad ; \quad Q_4 = C_4 * V_4 = 25 \cdot 10^{-6} * 42,4 = 1,06 \text{ mC}$$

$$Q_{68} = Q_{38} - Q_4 = 2,196 \cdot 10^{-3} - 1,06 \cdot 10^{-3} = 1,136 \text{ mC}$$

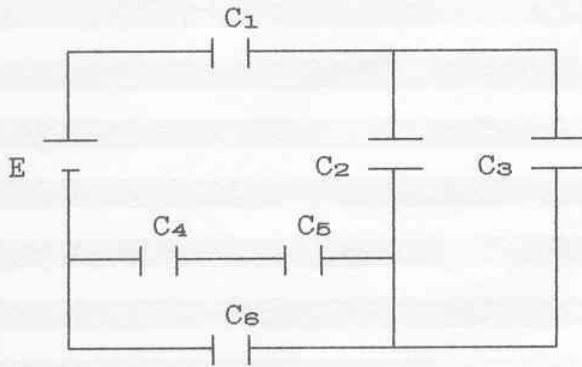
$$Q_6 = Q_{78} = Q_{68} = 1,136 \text{ mC} \quad ; \quad V_6 = \frac{Q_6}{C_6} = \frac{1,136 \cdot 10^{-3}}{30 \cdot 10^{-6}} = 37,87 \text{ V}$$

$$V_7 = V_8 = V_{68} - V_6 = 42,2 - 37,87 = 4,53 \text{ V}$$

$$Q_7 = C_7 * V_7 = Q_8 = C_8 * V_8 = \frac{Q_{78}}{2} = \frac{1,136 \cdot 10^{-3}}{2} = 0,568 \text{ mC}$$

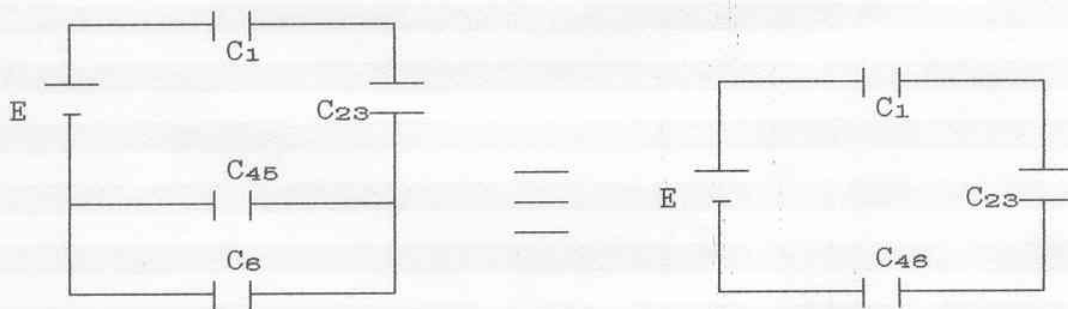
2.3 - Del circuito di figura determinare:

- 1.- la capacità totale;
- 2.- la carica complessivamente erogata dal generatore;
- 3.- la carica e la differenza di potenziale su ogni capacità.



$E = 100V$; $C_1 = 18\mu F$
 $C_2 = 10\mu F$; $C_3 = 8\mu F$
 $C_4 = 20\mu F$; $C_5 = 12\mu F$
 $C_6 = 10,5\mu F$

1.-



$$C_{23} = C_2 + C_3 = 10 \cdot 10^{-6} + 8 \cdot 10^{-6} = 18 \mu F$$

$$C_{45} = \frac{C_4 \cdot C_5}{C_4 + C_5} = \frac{20 \cdot 10^{-6} \cdot 12 \cdot 10^{-6}}{20 \cdot 10^{-6} + 12 \cdot 10^{-6}} = 7,5 \mu F$$

$$C_{46} = C_{45} + C_6 = 7,5 \cdot 10^{-6} + 10,5 \cdot 10^{-6} = 18 \mu F$$

$$C_T = \frac{C_1}{3} = \frac{18 \cdot 10^{-6}}{3} = 6 \mu F$$

2.-

$$Q_T = C_T * E = 6 * 10^{-6} * 100 = 600 \mu\text{C}$$

3.-

$$Q_1 = Q_{23} = Q_{46} = Q_T = 600 \mu\text{C} \quad ; \quad V_1 = V_{23} = V_{46} = \frac{E}{3} = \frac{100}{3} = 33,34 \text{ V}$$

$$V_2 = V_3 = V_{23} = 33,34 \text{ V} \quad ; \quad Q_2 = C_2 * V_2 = 10 * 10^{-6} * 33,34 = 333,4 \mu\text{C}$$

$$Q_3 = C_3 * V_3 = 8 * 10^{-6} * 33,34 = 266,67 \mu\text{C} \quad ; \quad V_6 = V_{45} = V_{46} = 33,34 \text{ V}$$

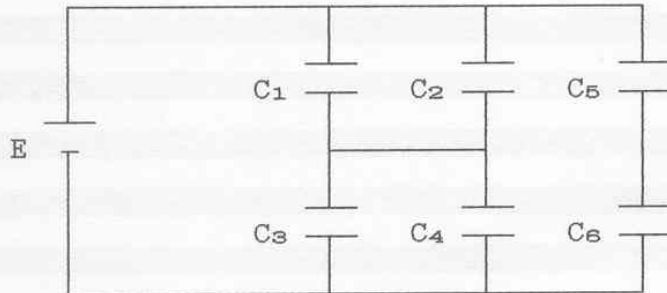
$$Q_6 = C_6 * V_6 = 10,5 * 10^{-6} * 33,34 = 350 \mu\text{C}$$

$$Q_4 = Q_5 = C_{45} * V_{45} = 7,5 * 10^{-6} * 33,34 = 250 \mu\text{C}$$

$$V_4 = \frac{Q_4}{C_4} = \frac{250 * 10^{-6}}{20 * 10^{-6}} = 12,5 \text{ V} \quad ; \quad V_5 = \frac{Q_5}{C_5} = \frac{250 * 10^{-6}}{12 * 10^{-6}} = 20,83 \text{ V}$$

2.4 - Del circuito di figura determinare:

- 1.- la capacità totale;
- 2.- la carica complessivamente erogata dal generatore;
- 3.- la carica e la differenza di potenziale su ogni capacità.




$$E = 100V ; C_1 = 12\mu F$$

$$C_2 = 6\mu F ; C_3 = 10\mu F$$

$$C_4 = 8\mu F ; C_5 = 20\mu F$$

$$C_6 = 12\mu F$$

1.-



$$C_{12} = C_1 + C_2 = 12 \cdot 10^{-6} + 6 \cdot 10^{-6} = 18 \mu F$$

$$C_{34} = C_3 + C_4 = 10 \cdot 10^{-6} + 8 \cdot 10^{-6} = 18 \mu F$$

$$C_{56} = \frac{C_5 \cdot C_6}{C_5 + C_6} = \frac{20 \cdot 10^{-6} \cdot 12 \cdot 10^{-6}}{20 \cdot 10^{-6} + 12 \cdot 10^{-6}} = 7,5 \mu F$$

$$C_{14} = \frac{C_{12}}{2} = \frac{18 \cdot 10^{-6}}{2} = 9 \mu F$$

$$C_T = C_{14} + C_{56} = 9 \cdot 10^{-6} + 7,5 \cdot 10^{-6} = 16,5 \mu F$$

2.-

$$Q_T = C_T * E = 16,5 * 10^{-6} * 100 = 1,65 \text{ mC}$$

3.-

$$V_{14} = V_{56} = E = 100 \text{ V}$$

$$Q_{12} = Q_{34} = Q_{14} = C_{14} * V_{14} = 9 * 10^{-6} * 100 = 900 \text{ } \mu\text{C}$$

$$Q_5 = Q_6 = Q_{56} = C_{56} * V_{56} = 7,5 * 10^{-6} * 100 = 750 \text{ } \mu\text{C}$$

$$V_5 = \frac{Q_5}{C_5} = \frac{750 * 10^{-6}}{20 * 10^{-6}} = 37,5 \text{ V} \quad ; \quad V_6 = \frac{Q_6}{C_6} = \frac{750 * 10^{-6}}{12 * 10^{-6}} = 62,5 \text{ V}$$

$$V_1 = V_2 = V_3 = V_4 = \frac{Q_{12}}{C_{12}} = \frac{900 * 10^{-6}}{18 * 10^{-6}} = 50 \text{ V}$$

$$Q_1 = C_1 * V_1 = 12 * 10^{-6} * 50 = 600 \text{ } \mu\text{C}$$

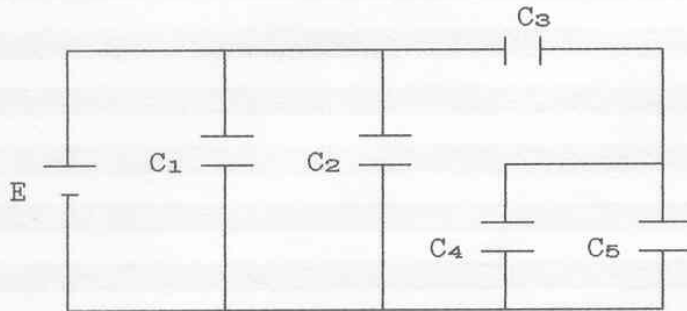
$$Q_2 = C_2 * V_2 = 6 * 10^{-6} * 50 = 300 \text{ } \mu\text{C}$$

$$Q_3 = C_3 * V_3 = 10 * 10^{-6} * 50 = 500 \text{ } \mu\text{C}$$

$$Q_4 = C_4 * V_4 = 8 * 10^{-6} * 50 = 400 \text{ } \mu\text{C}$$

2.5 - Del circuito di figura determinare:

- 1.- la capacità totale;
- 2.- la carica complessivamente erogata dal generatore;
- 3.- la carica e la differenza di potenziale su ogni capacità.



$$E = 10V \quad ; \quad C_1 = 1,4\mu F$$

$$C_2 = 2,1\mu F \quad ; \quad C_3 = 3,5\mu F$$

$$C_4 = 1,2\mu F \quad ; \quad C_5 = 1,3\mu F$$

1.-



$$C_{12} = C_1 + C_2 = 1,4 \cdot 10^{-6} + 2,1 \cdot 10^{-6} = 3,5 \mu F$$

$$C_{45} = C_4 + C_5 = 1,2 \cdot 10^{-6} + 1,3 \cdot 10^{-6} = 2,5 \mu F$$

$$C_{35} = \frac{C_3 \cdot C_{45}}{C_3 + C_{45}} = \frac{3,5 \cdot 10^{-6} \cdot 2,5 \cdot 10^{-6}}{3,5 \cdot 10^{-6} + 2,5 \cdot 10^{-6}} = 1,46 \mu F$$

$$C_T = C_{12} + C_{35} = 3,5 \cdot 10^{-6} + 1,46 \cdot 10^{-6} = 4,96 \mu F$$

2.-

$$Q_T = C_T \cdot E = 4,96 \cdot 10^{-6} \cdot 10 = 49,6 \mu C$$

3.-

$$V_{35} = V_1 = V_2 = E = 10 \text{ V} \quad ; \quad Q_1 = C_1 * V_1 = 1,4*10^{-6} * 10 = 14 \text{ } \mu\text{C}$$

$$Q_2 = C_2 * V_2 = 2,1*10^{-6} * 10 = 21 \text{ } \mu\text{C}$$

$$Q_3 = Q_{45} = Q_T - Q_1 - Q_2 = 49,6*10^{-6} - 14*10^{-6} - 21*10^{-6} = 14,6 \text{ } \mu\text{C}$$

$$V_3 = \frac{Q_3}{C_3} = \frac{14,6*10^{-6}}{3,5*10^{-6}} = 4,17 \text{ V}$$

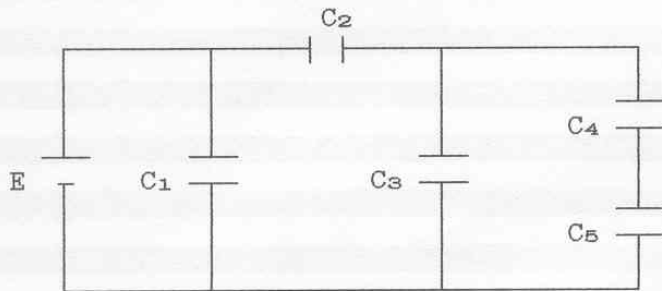
$$V_4 = V_5 = V_{35} - V_3 = 10 - 4,17 = 5,83 \text{ V}$$

$$Q_4 = C_4 * V_4 = 1,2*10^{-6} * 5,83 = 6,996 \text{ } \mu\text{C}$$

$$Q_5 = C_5 * V_5 = 1,3*10^{-6} * 5,83 = 7,579 \text{ } \mu\text{C}$$

2.6 - Del circuito di figura determinare:

- 1.- la capacità totale;
- 2.- la carica complessivamente erogata dal generatore;
- 3.- la carica e la differenza di potenziale su ogni capacità.

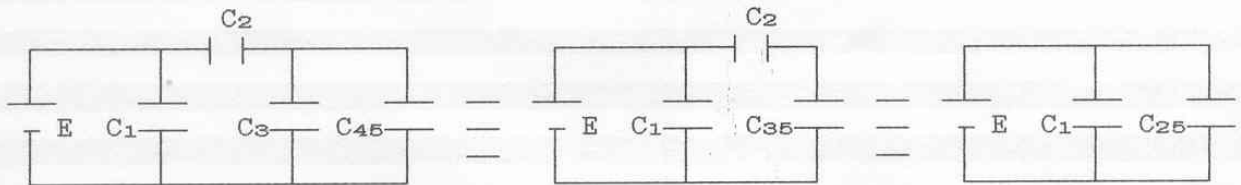


$$E = 100V \quad ; \quad C_1 = 4\mu F$$

$$C_2 = 12\mu F \quad ; \quad C_3 = 8\mu F$$

$$C_4 = 12\mu F \quad ; \quad C_5 = 6\mu F$$

1.-



$$C_{45} = \frac{C_4 * C_5}{C_4 + C_5} = \frac{12 * 10^{-6} * 6 * 10^{-6}}{12 * 10^{-6} + 6 * 10^{-6}} = 4 \mu F$$

$$C_{35} = C_3 + C_{45} = 8 * 10^{-6} + 4 * 10^{-6} = 12 \mu F$$

$$C_{25} = \frac{C_2}{2} = \frac{12 * 10^{-6}}{2} = 6 \mu F$$

$$C_T = C_1 + C_{25} = 4 * 10^{-6} + 6 * 10^{-6} = 10 \mu F$$

2.-

$$Q_T = C_T * E = 10 * 10^{-6} * 100 = 1000 \mu C$$

3.-

$$V_1 = V_{25} = E = 100 \text{ V} \quad ; \quad Q_1 = C_1 * V_1 = 4 * 10^{-6} * 100 = 400 \text{ } \mu\text{C}$$

$$Q_2 = Q_{35} = Q_{25} = Q_T - Q_1 = 1000 * 10^{-6} - 400 * 10^{-6} = 600 \text{ } \mu\text{C}$$

$$V_2 = V_{35} = V_3 = V_{45} = \frac{V_{25}}{2} = \frac{100}{2} = 50 \text{ V}$$

$$Q_3 = C_3 * V_3 = 8 * 10^{-6} * 50 = 400 \text{ } \mu\text{C}$$

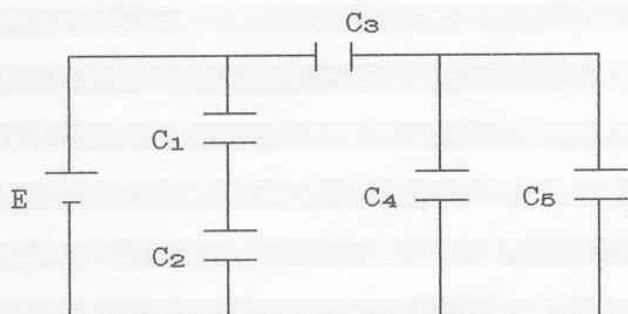
$$Q_4 = Q_5 = Q_{45} = Q_{35} - Q_3 = 600 * 10^{-6} - 400 * 10^{-6} = 200 \text{ } \mu\text{C}$$

$$V_4 = \frac{Q_4}{C_4} = \frac{200 * 10^{-6}}{12 * 10^{-6}} = 16,67 \text{ V}$$

$$V_5 = \frac{Q_5}{C_5} = \frac{200 * 10^{-6}}{6 * 10^{-6}} = 33,33 \text{ V}$$

2.7 - Del circuito di figura determinare:

- 1.- la capacità totale;
- 2.- la carica complessivamente erogata dal generatore;
- 3.- la carica e la differenza di potenziale su ogni capacità.



$$E = 200V \quad ; \quad C_1 = 8\mu F$$

$$C_2 = 12\mu F \quad ; \quad C_3 = 8\mu F$$

$$C_4 = 20\mu F \quad ; \quad C_5 = 5\mu F$$

1.-



$$C_{12} = \frac{C_1 * C_2}{C_1 + C_2} = \frac{8*10^{-6} * 12*10^{-6}}{8*10^{-6} + 12*10^{-6}} = 4,8 \mu F$$

$$C_{45} = C_4 + C_5 = 20*10^{-6} + 5*10^{-6} = 25 \mu F$$

$$C_{35} = \frac{C_3 * C_{45}}{C_3 + C_{45}} = \frac{8*10^{-6} * 25*10^{-6}}{8*10^{-6} + 25*10^{-6}} = 6,06 \mu F$$

$$C_T = C_{12} + C_{35} = 4,8*10^{-6} + 6,06*10^{-6} = 10,86 \mu F$$

2.-

$$Q_T = C_T * E = 10,86*10^{-6} * 200 = 2172 \mu C$$

3.-

$$V_{12} = V_{35} = E = 200 \text{ V}$$

$$Q_1 = Q_2 = Q_{12} = C_{12} * V_{12} = 4,8 * 10^{-6} * 200 = 960 \text{ } \mu\text{C}$$

$$Q_3 = Q_{45} = Q_{35} = C_{35} * V_{35} = 6,06 * 10^{-6} * 200 = 1212 \text{ } \mu\text{C}$$

$$V_1 = \frac{Q_1}{C_1} = \frac{960 * 10^{-6}}{8 * 10^{-6}} = 120 \text{ V}$$

$$V_2 = V_{12} - V_1 = 200 - 120 = 80 \text{ V}$$

$$V_3 = \frac{Q_3}{C_3} = \frac{1212 * 10^{-6}}{8 * 10^{-6}} = 151,5 \text{ V}$$

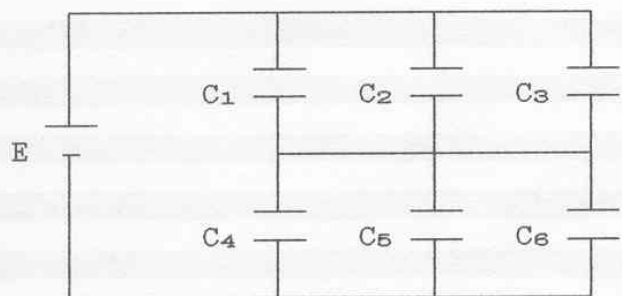
$$V_4 = V_5 = V_{45} = V_{35} - V_3 = 200 - 151,5 = 48,5 \text{ V}$$

$$Q_4 = C_4 * V_4 = 20 * 10^{-6} * 48,5 = 970 \text{ } \mu\text{C}$$

$$Q_5 = C_5 * V_5 = 5 * 10^{-6} * 48,5 = 242 \text{ } \mu\text{C}$$


2.8 - Del circuito di figura determinare:

- 1.- la capacità totale;
- 2.- la carica complessivamente erogata dal generatore;
- 3.- la carica e la differenza di potenziale su ogni capacità.



$$\begin{aligned}
 E &= 100V & ; & & C_1 &= 1,2\mu F \\
 C_2 &= 1,3\mu F & ; & & C_3 &= 2,5\mu F \\
 C_4 &= 1,4\mu F & ; & & C_5 &= 2,1\mu F \\
 C_6 &= 2,5\mu F
 \end{aligned}$$

1.-



$$C_{13} = C_1 + C_2 + C_3 = 1,2 \cdot 10^{-6} + 1,3 \cdot 10^{-6} + 2,5 \cdot 10^{-6} = 5 \mu F$$

$$C_{46} = C_4 + C_5 + C_6 = 1,4 \cdot 10^{-6} + 2,1 \cdot 10^{-6} + 2,5 \cdot 10^{-6} = 6 \mu F$$

$$C_T = \frac{C_{13} \cdot C_{46}}{C_{13} + C_{46}} = \frac{5 \cdot 10^{-6} \cdot 6 \cdot 10^{-6}}{5 \cdot 10^{-6} + 6 \cdot 10^{-6}} = 2,73 \mu F$$

2.-

$$Q_T = C_T \cdot E = 2,73 \cdot 10^{-6} \cdot 100 = 273 \mu C$$

3.-

$$Q_{13} = Q_{46} = Q_T = 273 \mu\text{C}$$

$$V_1 = V_2 = V_3 = \frac{Q_{13}}{C_{13}} = \frac{273 \cdot 10^{-6}}{5 \cdot 10^{-6}} = 54,55 \text{ V}$$

$$V_4 = V_5 = V_6 = \frac{Q_{46}}{C_{46}} = \frac{273 \cdot 10^{-6}}{6 \cdot 10^{-6}} = 45,45 \text{ V}$$

$$Q_1 = C_1 * V_1 = 1,2 \cdot 10^{-6} * 54,55 = 65,45 \mu\text{C}$$

$$Q_2 = C_2 * V_2 = 1,3 \cdot 10^{-6} * 54,55 = 70,91 \mu\text{C}$$

$$Q_3 = C_3 * V_3 = 2,5 \cdot 10^{-6} * 54,55 = 136,37 \mu\text{C}$$

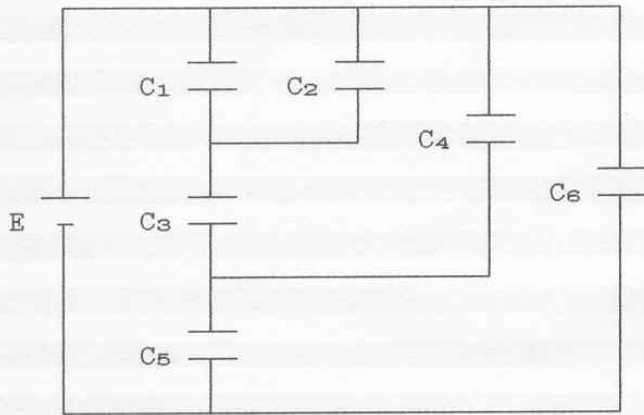
$$Q_4 = C_4 * V_4 = 1,4 \cdot 10^{-6} * 45,45 = 63,64 \mu\text{C}$$

$$Q_5 = C_5 * V_5 = 2,1 \cdot 10^{-6} * 45,45 = 95,45 \mu\text{C}$$

$$Q_6 = C_6 * V_6 = 2,5 \cdot 10^{-6} * 45,45 = 113,63 \mu\text{C}$$

2.9 - Del circuito di figura determinare:

- 1.- la capacità totale;
- 2.- la carica complessivamente erogata dal generatore;
- 3.- la carica e la differenza di potenziale su ogni capacità.



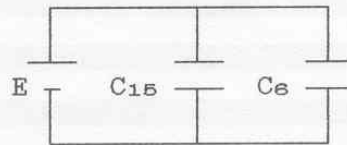
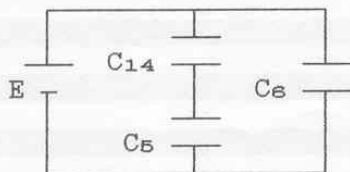
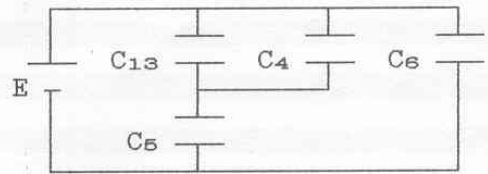
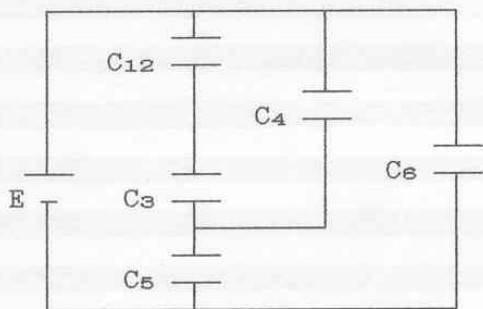
$$E = 100V$$

$$C_1 = C_2 = C_4 = 0,5nF$$

$$C_3 = C_5 = 1nF$$

$$C_6 = 2nF$$

1.-



$$C_{12} = C_1 + C_2 = 2 * C_1 = 2 * 0,5 * 10^{-9} = 1 \text{ nF}$$

$$C_{13} = \frac{C_3}{2} = \frac{1 \cdot 10^{-9}}{2} = 0,5 \text{ nF}$$

$$C_{14} = C_{13} + C_4 = 2 * C_4 = 2 * 0,5 \cdot 10^{-9} = 1 \text{ nF}$$

$$C_{15} = \frac{C_5}{2} = \frac{1 \cdot 10^{-9}}{2} = 0,5 \text{ nF}$$

$$C_T = C_{16} = C_{15} + C_6 = 0,5 \cdot 10^{-9} + 2 \cdot 10^{-9} = 2,5 \text{ nF}$$

2.-

$$Q_T = C_T * E = 2,5 \cdot 10^{-9} * 100 = 250 \text{ nC}$$

3.-

$$V_6 = E = 100 \text{ V}$$

$$Q_6 = C_6 * E = 2 \cdot 10^{-9} * 100 = 200 \text{ nC}$$

$$Q_{15} = Q_5 = Q_{14} = Q_T - Q_6 = 250 \cdot 10^{-9} - 200 \cdot 10^{-9} = 50 \text{ nC}$$

$$V_5 = V_{14} = V_4 = V_{13} = \frac{Q_5}{C_5} = \frac{50 \cdot 10^{-9}}{1 \cdot 10^{-9}} = 50 \text{ V}$$

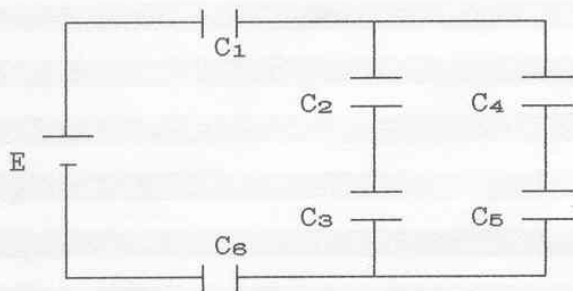
$$Q_4 = Q_{13} = Q_3 = Q_{12} = \frac{Q_{14}}{2} = \frac{50 \cdot 10^{-9}}{2} = 25 \text{ nC}$$

$$V_3 = V_{12} = V_1 = V_2 = \frac{V_{13}}{2} = \frac{50}{2} = 25 \text{ V}$$

$$Q_1 = Q_2 = \frac{Q_{12}}{2} = \frac{25 \cdot 10^{-9}}{2} = 12,5 \text{ nC}$$

2.10 - Del circuito di figura determinare:

- 1.- la capacità totale;
- 2.- la carica complessivamente erogata dal generatore;
- 3.- la carica e la differenza di potenziale su ogni capacità.



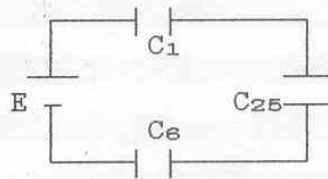
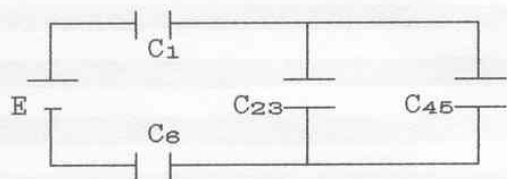
$$E = 100V \quad ; \quad C_1 = 12\mu F$$

$$C_2 = 180\mu F \quad ; \quad C_3 = 20\mu F$$

$$C_4 = C_5 = 60\mu F$$

$$C_6 = 2,4\mu F$$

1.-



$$C_{23} = \frac{C_2 * C_3}{C_2 + C_3} = \frac{180 \cdot 10^{-6} * 20 \cdot 10^{-6}}{180 \cdot 10^{-6} + 20 \cdot 10^{-6}} = 18 \mu F$$

$$C_{45} = \frac{C_4}{2} = \frac{60 \cdot 10^{-6}}{2} = 30 \mu F$$

$$C_{25} = C_{23} + C_{45} = 18 \cdot 10^{-6} + 30 \cdot 10^{-6} = 48 \mu F$$

$$C_T = \frac{1}{\frac{1}{C_1} + \frac{1}{C_{25}} + \frac{1}{C_6}} = \frac{1}{\frac{1}{12 \cdot 10^{-6}} + \frac{1}{48 \cdot 10^{-6}} + \frac{1}{2,4 \cdot 10^{-6}}} = 1,92 \mu F$$

2.-

$$Q_T = C_T * E = 1,92 \cdot 10^{-6} * 100 = 192 \mu\text{C}$$

3.-

$$Q_1 = Q_6 = Q_{25} = Q_T = 192 \mu\text{C}$$

$$V_1 = \frac{Q_1}{C_1} = \frac{192 \cdot 10^{-6}}{12 \cdot 10^{-6}} = 16 \text{ V}$$

$$V_6 = \frac{Q_6}{C_6} = \frac{192 \cdot 10^{-6}}{2,4 \cdot 10^{-6}} = 80 \text{ V}$$

$$V_{25} = V_{23} = V_{45} = \frac{Q_{25}}{C_{25}} = \frac{192 \cdot 10^{-6}}{48 \cdot 10^{-6}} = 4 \text{ V}$$

$$Q_2 = Q_3 = C_{23} * V_{23} = 18 \cdot 10^{-6} * 4 = 72 \mu\text{C}$$

$$Q_4 = Q_5 = C_{45} * V_{45} = 30 \cdot 10^{-6} * 4 = 120 \mu\text{C}$$

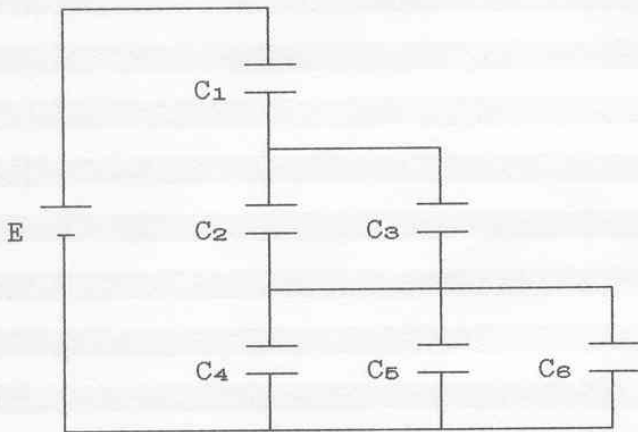
$$V_2 = \frac{Q_2}{C_2} = \frac{72 \cdot 10^{-6}}{180 \cdot 10^{-6}} = 0,4 \text{ V}$$

$$V_3 = \frac{Q_3}{C_3} = \frac{72 \cdot 10^{-6}}{20 \cdot 10^{-6}} = 3,6 \text{ V}$$

$$V_4 = V_5 = \frac{V_{45}}{2} = \frac{4}{2} = 2 \text{ V}$$

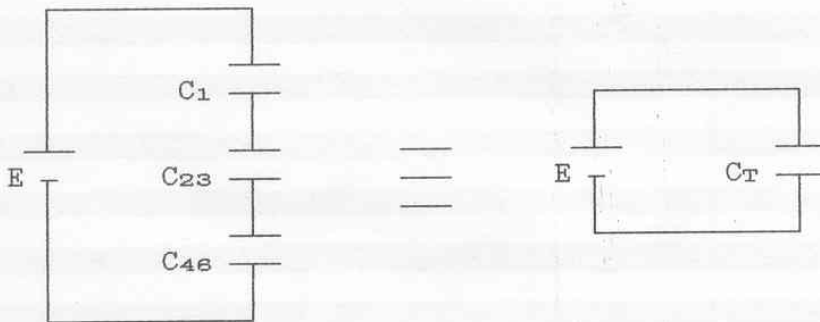
2.11 - Del circuito di figura determinare:

- 1.- la capacità totale;
- 2.- la carica complessivamente erogata dal generatore;
- 3.- la carica e la differenza di potenziale su ogni capacità.



$$\begin{aligned}
 E &= 62,5V & ; & & C_1 &= 10\text{nF} \\
 C_2 &= 15\text{nF} & ; & & C_3 &= 5\text{nF} \\
 C_4 &= 3\text{nF} & ; & & C_5 &= 5\text{nF} \\
 C_6 &= 2\text{nF}
 \end{aligned}$$

1.-



$$C_{23} = C_2 + C_3 = 15 \cdot 10^{-9} + 5 \cdot 10^{-9} = 20 \text{ nF}$$

$$C_{46} = C_4 + C_5 + C_6 = 3 \cdot 10^{-9} + 5 \cdot 10^{-9} + 2 \cdot 10^{-9} = 10 \text{ nF}$$

$$C_T = \frac{1}{\frac{1}{C_1} + \frac{1}{C_{23}} + \frac{1}{C_{46}}} = \frac{1}{\frac{1}{10 \cdot 10^{-9}} + \frac{1}{20 \cdot 10^{-9}} + \frac{1}{10 \cdot 10^{-9}}} = 4 \text{ nF}$$

2.-

$$Q_T = C_T * E = 4 * 10^{-9} * 62,5 = 250 \text{ nC}$$

3.-

$$Q_1 = Q_{23} = Q_{46} = Q_T = 250 \text{ nC}$$

$$V_1 = \frac{Q_1}{C_1} = \frac{250 * 10^{-9}}{10 * 10^{-9}} = 25 \text{ V}$$

$$V_2 = V_3 = V_{23} = \frac{Q_{23}}{C_{23}} = \frac{250 * 10^{-9}}{20 * 10^{-9}} = 12,5 \text{ V}$$

$$V_4 = V_5 = V_6 = V_{46} = \frac{Q_{46}}{C_{46}} = \frac{250 * 10^{-9}}{10 * 10^{-9}} = 25 \text{ V}$$

$$Q_2 = C_2 * V_2 = 15 * 10^{-9} * 12,5 = 187,5 \text{ nC}$$

$$Q_3 = C_3 * V_3 = 5 * 10^{-9} * 12,5 = 62,5 \text{ nC}$$

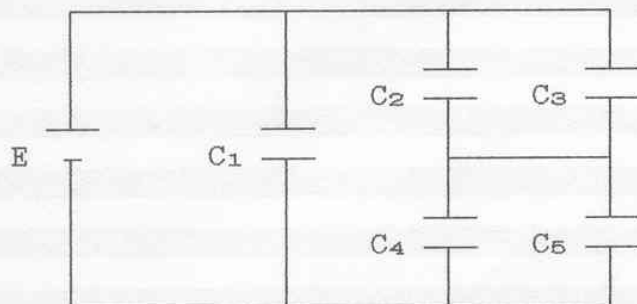
$$Q_4 = C_4 * V_4 = 3 * 10^{-9} * 25 = 75 \text{ nC}$$

$$Q_5 = C_5 * V_5 = 5 * 10^{-9} * 25 = 125 \text{ nC}$$

$$Q_6 = C_6 * V_6 = 2 * 10^{-9} * 25 = 50 \text{ nC}$$

2.12 - Del circuito di figura determinare:

- 1.- la capacità totale;
- 2.- la carica complessivamente erogata dal generatore;
- 3.- la carica e la differenza di potenziale su ogni capacità.



$$E = 100V \quad ; \quad C_1 = 1,75\mu F$$

$$C_2 = 1,2\mu F \quad ; \quad C_3 = 1,3\mu F$$

$$C_4 = 1,4\mu F \quad ; \quad C_5 = 2,1\mu F$$

1.-



$$C_{23} = C_2 + C_3 = 1,2 \cdot 10^{-6} + 1,3 \cdot 10^{-6} = 2,5 \mu F$$

$$C_{45} = C_4 + C_5 = 1,4 \cdot 10^{-6} + 2,1 \cdot 10^{-6} = 3,5 \mu F$$

$$C_{25} = \frac{C_{23} \cdot C_{45}}{C_{23} + C_{45}} = \frac{2,5 \cdot 10^{-6} \cdot 3,5 \cdot 10^{-6}}{2,5 \cdot 10^{-6} + 3,5 \cdot 10^{-6}} = 1,46 \mu F$$

$$C_T = C_{15} = C_1 + C_{25} = 1,75 \cdot 10^{-6} + 1,46 \cdot 10^{-6} = 3,21 \mu F$$

2.-

$$Q_T = C_T \cdot E = 3,21 \cdot 10^{-6} \cdot 100 = 321 \mu C$$

3.-

$$V_1 = V_{25} = E = 100 \text{ V}$$

$$Q_1 = C_1 * V_1 = 1,75 * 10^{-6} * 100 = 175 \text{ } \mu\text{C}$$

$$Q_{25} = Q_{23} = Q_{45} = C_{25} * V_{25} = 1,46 * 10^{-6} * 100 = 146 \text{ } \mu\text{C}$$

$$V_2 = V_3 = V_{23} = \frac{Q_{23}}{C_{23}} = \frac{146 * 10^{-6}}{2,5 * 10^{-6}} = 58,4 \text{ V}$$

$$V_4 = V_5 = V_{45} = \frac{Q_{45}}{C_{45}} = \frac{146 * 10^{-6}}{3,5 * 10^{-6}} = 41,6 \text{ V}$$

$$Q_2 = C_2 * V_2 = 1,2 * 10^{-6} * 58,4 = 70,08 \text{ } \mu\text{C}$$

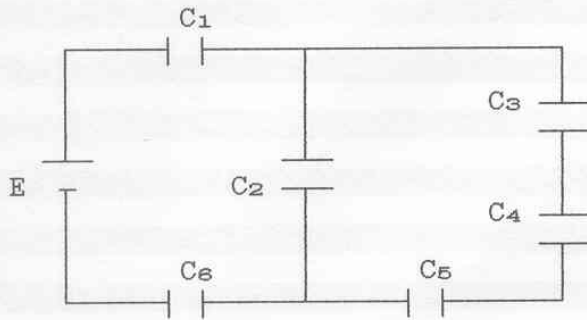
$$Q_3 = C_3 * V_3 = 1,3 * 10^{-6} * 58,4 = 75,92 \text{ } \mu\text{C}$$

$$Q_4 = C_4 * V_4 = 1,4 * 10^{-6} * 41,6 = 58,24 \text{ } \mu\text{C}$$

$$Q_5 = C_5 * V_5 = 2,1 * 10^{-6} * 41,6 = 87,36 \text{ } \mu\text{C}$$

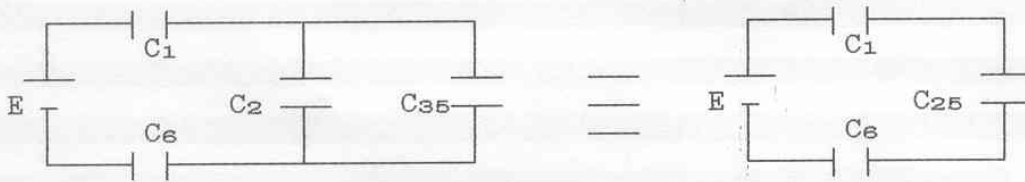
2.13 - Del circuito di figura determinare:

- 1.- la capacità totale;
- 2.- la carica complessivamente erogata dal generatore;
- 3.- la carica e la differenza di potenziale su ogni capacità.



$E = 10V$; $C_1 = 30\mu F$
 $C_2 = 1,85\mu F$; $C_3 = 18\mu F$
 $C_4 = 6\mu F$; $C_5 = 10,5\mu F$
 $C_6 = 30\mu F$

1.-



$$C_{35} = \frac{1}{\frac{1}{C_3} + \frac{1}{C_4} + \frac{1}{C_5}} = \frac{1}{\frac{1}{18 \cdot 10^{-6}} + \frac{1}{6 \cdot 10^{-6}} + \frac{1}{10,5 \cdot 10^{-6}}} = 3,15 \mu F$$

$$C_{25} = C_2 + C_{35} = 1,85 \cdot 10^{-6} + 3,15 \cdot 10^{-6} = 5 \mu F$$

$$C_T = \frac{1}{\frac{1}{C_1} + \frac{1}{C_{25}} + \frac{1}{C_6}} = \frac{1}{\frac{1}{30 \cdot 10^{-6}} + \frac{1}{5 \cdot 10^{-6}} + \frac{1}{30 \cdot 10^{-6}}} = 3,75 \mu F$$

2.-

$$Q_T = C_T \cdot E = 3,75 \cdot 10^{-6} \cdot 10 = 37,5 \mu C$$

3.-

$$Q_1 = Q_{25} = Q_6 = Q_T = 37,5 \mu\text{C}$$

$$V_1 = V_6 = \frac{Q_1}{C_1} = \frac{37,5 \cdot 10^{-6}}{30 \cdot 10^{-6}} = 1,25 \text{ V}$$

$$V_2 = V_{25} = V_{35} = \frac{Q_{25}}{C_{25}} = \frac{37,5 \cdot 10^{-6}}{5 \cdot 10^{-6}} = 7,5 \text{ V}$$

$$Q_2 = C_2 * V_2 = 1,85 \cdot 10^{-6} * 7,5 = 13,875 \mu\text{C}$$

$$Q_3 = Q_4 = Q_5 = Q_{35} = C_{35} * V_{35} = 7,5 \cdot 10^{-6} * 3,15 = 23,625 \mu\text{C}$$

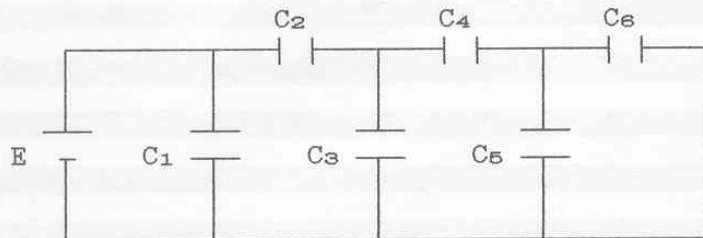
$$V_3 = \frac{Q_3}{C_3} = \frac{23,625 \cdot 10^{-6}}{18 \cdot 10^{-6}} = 1,3125 \text{ V}$$

$$V_4 = \frac{Q_4}{C_4} = \frac{23,625 \cdot 10^{-6}}{6 \cdot 10^{-6}} = 3,9375 \text{ V}$$

$$V_5 = \frac{Q_5}{C_5} = \frac{23,625 \cdot 10^{-6}}{10,5 \cdot 10^{-6}} = 2,25 \text{ V}$$

2.14 - Del circuito di figura determinare:

- 1.- la capacità totale;
- 2.- la carica complessivamente erogata dal generatore;
- 3.- la carica e la differenza di potenziale su ogni capacità.



$$E = 10V$$

$$C_1 = C_3 = C_5 = C_6 = 1\text{pF}$$

$$C_2 = C_4 = 2\text{pF}$$

1.-



$$C_{56} = C_5 + C_6 = 2 * C_5 = 2 * 1 * 10^{-12} = 2 \text{ pF}$$

$$C_{46} = \frac{C_4 * C_{56}}{C_4 + C_{56}} = \frac{C_4}{2} = \frac{2 * 10^{-12}}{2} = 1 \text{ pF}$$

$$C_{36} = C_3 + C_{46} = 2 * C_3 = 2 * 1 * 10^{-12} = 2 \text{ pF}$$

$$C_{26} = \frac{C_2 * C_{36}}{C_2 + C_{36}} = \frac{C_2}{2} = \frac{2 * 10^{-12}}{2} = 1 \text{ pF}$$

$$C_T = C_{16} = C_1 + C_{26} = 2 * C_1 = 2 * 1 * 10^{-12} = 2 \text{ pF}$$

2.-

$$Q_T = C_T * E = 2 * 10^{-12} * 10 = 20 \text{ pC}$$

3.-

$$V_1 = V_{26} = E = 10 \text{ V}$$

$$Q_1 = Q_{26} = Q_2 = Q_{36} = \frac{Q_T}{2} = \frac{20 * 10^{-12}}{2} = 10 \text{ pC}$$

$$Q_3 = Q_{45} = \frac{Q_2}{2} = \frac{10 * 10^{-12}}{2} = 5 \text{ pC}$$

$$V_2 = V_{36} = V_3 = V_{46} = \frac{E}{2} = \frac{10}{2} = 5 \text{ V}$$

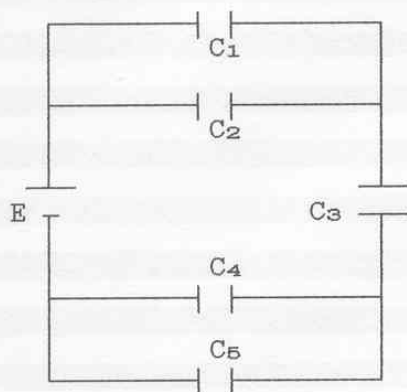
$$V_4 = V_5 = V_6 = \frac{V_{46}}{2} = \frac{5}{2} = 2,5 \text{ V}$$

$$Q_4 = Q_{56} = \frac{Q_{36}}{2} = \frac{5 * 10^{-12}}{2} = 2,5 \text{ pC}$$

$$Q_5 = Q_6 = \frac{Q_{56}}{2} = \frac{2,5 * 10^{-12}}{2} = 1,25 \text{ pC}$$

2.15 - Del circuito di figura determinare:

- 1.- la capacità totale;
- 2.- la carica complessivamente erogata dal generatore;
- 3.- la carica e la differenza di potenziale su ogni capacità.

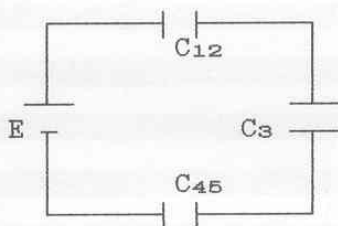


$$E = 10V \quad ; \quad C_1 = 12nF$$

$$C_2 = 8nF \quad ; \quad C_3 = 10nF$$

$$C_4 = 12nF \quad ; \quad C_5 = 13nF$$

1.-



$$C_{12} = C_1 + C_2 = 12 \cdot 10^{-9} + 8 \cdot 10^{-9} = 20 \text{ nF}$$

$$C_{45} = C_4 + C_5 = 12 \cdot 10^{-9} + 13 \cdot 10^{-9} = 25 \text{ nF}$$

$$C_T = \frac{1}{\frac{1}{C_{12}} + \frac{1}{C_3} + \frac{1}{C_{45}}} = \frac{1}{\frac{1}{20 \cdot 10^{-9}} + \frac{1}{10 \cdot 10^{-9}} + \frac{1}{25 \cdot 10^{-9}}} = 5,26 \text{ nF}$$

2.-

$$Q_T = C_T \cdot E = 5,26 \cdot 10^{-9} \cdot 10 = 52,6 \text{ nC}$$

3.-

$$Q_{12} = Q_3 = Q_{45} = Q_T = 52,6 \text{ nC}$$

$$V_1 = V_2 = V_{12} = \frac{Q_{12}}{C_{12}} = \frac{52,6 \cdot 10^{-9}}{20 \cdot 10^{-9}} = 2,63 \text{ V}$$

$$V_3 = \frac{Q_3}{C_3} = \frac{52,6 \cdot 10^{-9}}{10 \cdot 10^{-9}} = 5,26 \text{ V}$$

$$V_4 = V_5 = V_{45} = \frac{Q_{45}}{C_{45}} = \frac{52,6 \cdot 10^{-9}}{25 \cdot 10^{-9}} = 2,1 \text{ V}$$

$$Q_1 = C_1 * V_1 = 12 \cdot 10^{-9} * 2,63 = 31,56 \text{ nC}$$

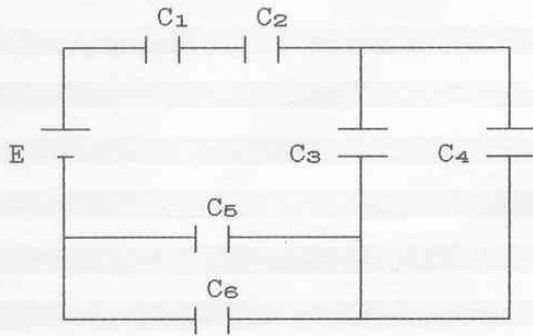
$$Q_2 = C_2 * V_2 = 8 \cdot 10^{-9} * 2,63 = 21,04 \text{ nC}$$

$$Q_4 = C_4 * V_4 = 12 \cdot 10^{-9} * 2,1 = 25,2 \text{ nC}$$

$$Q_5 = C_5 * V_5 = 13 \cdot 10^{-9} * 2,1 = 27,3 \text{ nC}$$

2.16 - Del circuito di figura determinare:

- 1.- la capacità totale;
- 2.- la carica complessivamente erogata dal generatore;
- 3.- la carica e la differenza di potenziale su ogni capacità.



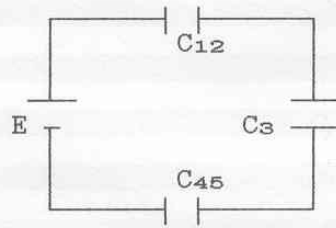
$$E = 10V$$

$$C_1 = C_2 = 20\mu F$$

$$C_3 = 12\mu F ; C_4 = 6\mu F$$

$$C_5 = 10\mu F ; C_6 = 8\mu F$$

1.-



$$C_{12} = \frac{C_1 * C_2}{C_1 + C_2} = \frac{C_1}{2} = \frac{20 * 10^{-6}}{2} = 10 \mu F$$

$$C_{34} = C_3 + C_4 = 12 * 10^{-6} + 6 * 10^{-6} = 18 \mu F$$

$$C_{56} = C_5 + C_6 = 10 * 10^{-6} + 8 * 10^{-6} = 18 \mu F$$

$$C_T = \frac{1}{\frac{1}{C_{12}} + \frac{1}{C_{34}} + \frac{1}{C_{56}}} = \frac{1}{\frac{1}{10 * 10^{-6}} + \frac{1}{18 * 10^{-6}} + \frac{1}{18 * 10^{-6}}} = 4,74 \mu F$$

2.-

$$Q_T = Q_{12} = Q_{34} = Q_{56} = C_T * E = 4,74 * 10^{-6} * 10 = 47,4 \mu\text{C}$$

3.-

$$Q_{12} = Q_{34} = Q_{56} = Q_T = 47,4 \mu\text{C}$$

$$V_{12} = \frac{Q_{12}}{C_{12}} = \frac{47,4 * 10^{-6}}{10 * 10^{-6}} = 4,74 \text{ V}$$

$$V_1 = V_2 = V_{12} = \frac{V_{12}}{2} = \frac{4,74}{2} = 2,37 \text{ V}$$

$$Q_1 = Q_2 = Q_{12} = Q_T = 47,4 \mu\text{C}$$

$$V_3 = V_4 = V_{34} = \frac{Q_{34}}{C_{34}} = \frac{47,4 * 10^{-6}}{18 * 10^{-6}} = 2,63 \text{ V}$$

$$V_5 = V_6 = V_{56} = \frac{Q_{56}}{C_{56}} = \frac{47,4 * 10^{-6}}{18 * 10^{-6}} = 2,63 \text{ V}$$

$$Q_3 = C_3 * V_3 = 12 * 10^{-6} * 2,63 = 31,6 \mu\text{C}$$

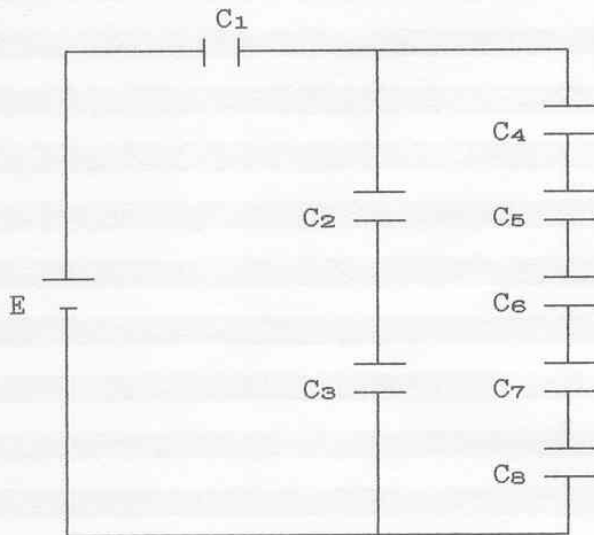
$$Q_4 = C_4 * V_4 = 6 * 10^{-6} * 2,63 = 15,8 \mu\text{C}$$

$$Q_5 = C_5 * V_5 = 10 * 10^{-6} * 2,63 = 26,3 \mu\text{C}$$

$$Q_6 = C_6 * V_6 = 8 * 10^{-6} * 2,63 = 21,06 \mu\text{C}$$

2.17 - Del circuito di figura determinare:

- 1.- la capacità totale;
- 2.- la carica complessivamente erogata dal generatore;
- 3.- la carica e la differenza di potenziale su ogni capacità.

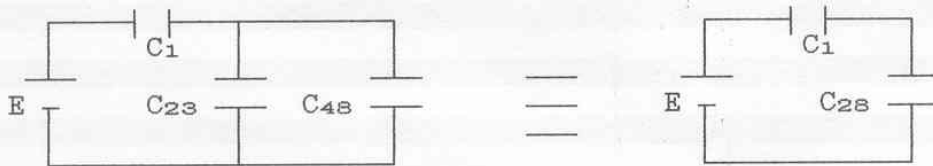


$$E = 300 \text{ V} \quad ; \quad C_1 = 8 \text{ nF}$$

$$C_2 = 3,6 \text{ nF} \quad ; \quad C_3 = 2,4 \text{ nF}$$

$$C_4 = C_5 = C_6 = C_7 = C_8 = 7,8 \text{ nF}$$

1.-



$$C_{23} = \frac{C_2 * C_3}{C_2 + C_3} = \frac{3,6 * 10^{-9} * 2,4 * 10^{-9}}{3,6 * 10^{-9} + 2,4 * 10^{-9}} = 1,44 \text{ nF}$$

$$C_{48} = \frac{C_4}{5} = \frac{7,8 * 10^{-9}}{5} = 1,56 \text{ nF}$$

$$C_{28} = C_{23} + C_{48} = 1,44 * 10^{-9} + 1,56 * 10^{-9} = 3 \text{ nF}$$

$$C_T = \frac{C_1 * C_{28}}{C_1 + C_{28}} = \frac{3 * 10^{-9} * 8 * 10^{-9}}{3 * 10^{-9} + 8 * 10^{-9}} = 2,18 \text{ nF}$$

2.-

$$Q_T = C_T * E = 2,18 * 10^{-9} * 300 = 654,54 \text{ nC}$$

3.-

$$Q_1 = Q_{28} = Q_T = 654,54 \text{ nC}$$

$$V_1 = \frac{Q_1}{C_1} = \frac{654,54 * 10^{-9}}{8 * 10^{-9}} = 81,82 \text{ V}$$

$$V_{28} = V_{23} = V_{48} = E - V_1 = 300 - 81,82 = 218,18 \text{ V}$$

$$Q_2 = Q_3 = C_{23} * V_{23} = 1,44 * 10^{-9} * 218,18 = 314,18 \text{ nC}$$

$$V_2 = \frac{Q_2}{C_2} = \frac{314,18 * 10^{-9}}{3,6 * 10^{-9}} = 87,27 \text{ V}$$

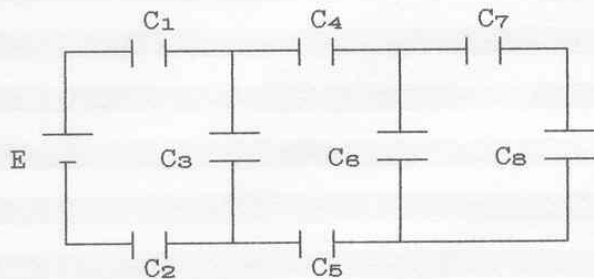
$$V_3 = \frac{Q_3}{C_3} = \frac{314,18 * 10^{-9}}{2,4 * 10^{-9}} = 130,91 \text{ V}$$

$$Q_4 = Q_5 = Q_6 = Q_7 = Q_8 = C_{48} * V_{48} = 1,56 * 10^{-9} * 218,18 = 340,36 \text{ nC}$$

$$V_4 = V_5 = V_6 = V_7 = V_8 = \frac{V_{48}}{5} = \frac{218,18}{5} = 43,64 \text{ V}$$

2.18 - Del circuito di figura determinare:

- 1.- la capacità totale;
- 2.- la carica complessivamente erogata dal generatore;
- 3.- la carica e la differenza di potenziale su ogni capacità.



$$E = 100V \quad ; \quad C_1 = 7\mu F$$

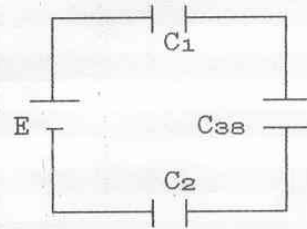
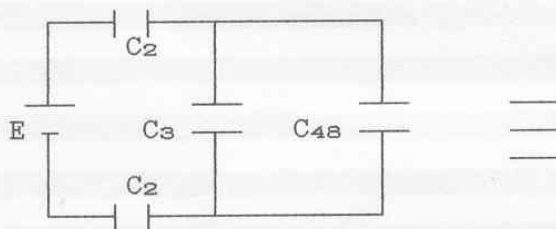
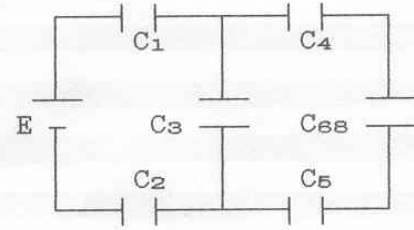
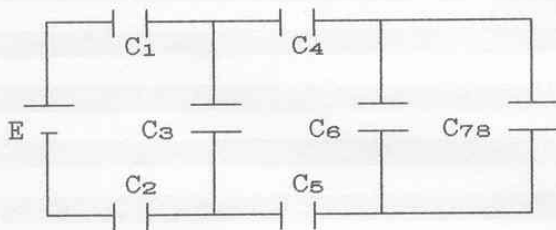
$$C_2 = 8\mu F \quad ; \quad C_3 = 6\mu F$$

$$C_4 = 4\mu F \quad ; \quad C_5 = 5\mu F$$

$$C_6 = 3\mu F \quad ; \quad C_7 = 2\mu F$$

$$C_8 = 1\mu F$$

1.-



$$C_{78} = \frac{C_7 * C_8}{C_7 + C_8} = \frac{2 \cdot 10^{-6} * 1 \cdot 10^{-6}}{2 \cdot 10^{-6} + 1 \cdot 10^{-6}} = 0,67 \mu F$$

$$C_{68} = C_6 + C_{78} = 3 \cdot 10^{-6} + 0,67 \cdot 10^{-6} = 3,67 \mu F$$

$$C_{48} = \frac{1}{\frac{1}{C_4} + \frac{1}{C_{68}} + \frac{1}{C_5}} = \frac{1}{\frac{1}{4 \cdot 10^{-6}} + \frac{1}{3,67 \cdot 10^{-6}} + \frac{1}{5 \cdot 10^{-6}}} = 1,384 \mu F$$

$$C_{38} = C_3 + C_{48} = 6 \cdot 10^{-6} + 1,384 \cdot 10^{-6} = 7,384 \mu F$$

$$C_T = \frac{1}{\frac{1}{C_1} + \frac{1}{C_4} + \frac{1}{C_2}} = \frac{1}{\frac{1}{7 \cdot 10^{-6}} + \frac{1}{7,384 \cdot 10^{-6}} + \frac{1}{8 \cdot 10^{-6}}} = 2,48 \mu\text{F}$$

2.-

$$Q_T = C_T * E = 2,48 \cdot 10^{-6} * 100 = 248 \mu\text{C}$$

3.-

$$Q_1 = Q_2 = Q_T = 248 \mu\text{C}$$

$$V_1 = \frac{Q_1}{C_1} = \frac{248 \cdot 10^{-6}}{7 \cdot 10^{-6}} = 35,43 \text{ V}$$

$$V_2 = \frac{Q_2}{C_2} = \frac{248 \cdot 10^{-6}}{8 \cdot 10^{-6}} = 31 \text{ V}$$

$$V_3 = E - V_1 - V_2 = 100 - 35,43 - 31 = 33,57 \text{ V}$$

$$Q_3 = C_3 * V_3 = 6 \cdot 10^{-6} * 33,57 = 201,42 \mu\text{C}$$

$$Q_4 = Q_5 = Q_T - Q_3 = 248 \cdot 10^{-6} - 201,42 \cdot 10^{-6} = 46,58 \mu\text{C}$$

$$V_4 = \frac{Q_4}{C_4} = \frac{46,58 \cdot 10^{-6}}{4 \cdot 10^{-6}} = 11,645 \text{ V}$$

$$V_5 = \frac{Q_5}{C_5} = \frac{46,58 \cdot 10^{-6}}{5 \cdot 10^{-6}} = 9,316 \text{ V}$$

$$V_6 = V_3 - V_4 - V_5 = 33,57 - 11,645 - 9,316 = 12,609 \text{ V}$$

$$Q_6 = C_6 * V_6 = 3 \cdot 10^{-6} * 12,609 = 37,827 \mu\text{C}$$

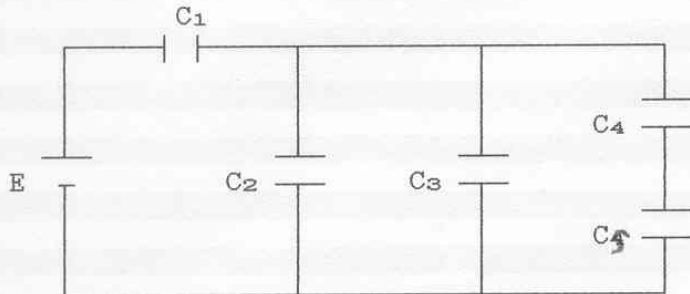
$$Q_7 = Q_8 = Q_4 - Q_6 = 46,58 \cdot 10^{-6} - 37,827 \cdot 10^{-6} = 8,753 \mu\text{C}$$

$$V_7 = \frac{Q_7}{C_7} = \frac{8,753 \cdot 10^{-6}}{2 \cdot 10^{-6}} = 4,3765 \text{ V}$$

$$V_8 = \frac{Q_8}{C_8} = \frac{8,753 \cdot 10^{-6}}{1 \cdot 10^{-6}} = 8,753 \text{ V}$$

2.19 - Del circuito di figura determinare:

- 1.- la capacità totale;
- 2.- la carica complessivamente erogata dal generatore;
- 3.- la carica e la differenza di potenziale su ogni capacità.

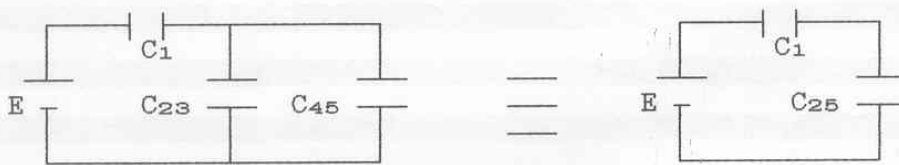


$$E = 100 \text{ V} \quad ; \quad C_1 = 120 \text{ } \mu\text{F}$$

$$C_2 = 30 \text{ } \mu\text{F} \quad ; \quad C_3 = 50 \text{ } \mu\text{F}$$

$$C_4 = C_5 = 40 \text{ } \mu\text{F}$$

1.-



$$C_{45} = \frac{C_4 * C_5}{C_4 + C_5} = \frac{C_4}{2} = \frac{40 * 10^{-6}}{2} = 20 \text{ } \mu\text{F}$$

$$C_{23} = C_2 + C_3 = 30 * 10^{-6} + 50 * 10^{-6} = 80 \text{ } \mu\text{F}$$

$$C_{25} = C_{23} + C_{45} = 80 * 10^{-6} + 20 * 10^{-6} = 100 \text{ } \mu\text{F}$$

$$C_T = \frac{C_1 * C_{25}}{C_1 + C_{25}} = \frac{120 * 10^{-6} * 100 * 10^{-6}}{120 * 10^{-6} + 100 * 10^{-6}} = 54,54 \text{ } \mu\text{F}$$

2.-

$$Q_T = C_T * E = 54,54 * 10^{-6} * 100 = 5454 \text{ } \mu\text{C}$$

3.-

$$Q_1 = Q_{25} = Q_T = 5454 \mu\text{C}$$

$$V_1 = \frac{Q_1}{C_1} = \frac{5454 \cdot 10^{-6}}{120 \cdot 10^{-6}} = 45,45 \text{ V}$$

$$V_2 = V_3 = V_{45} = E - V_1 = 100 - 45,45 = 54,55 \text{ V}$$

$$Q_2 = C_2 * V_2 = 30 \cdot 10^{-6} * 54,55 = 1636,5 \mu\text{C}$$

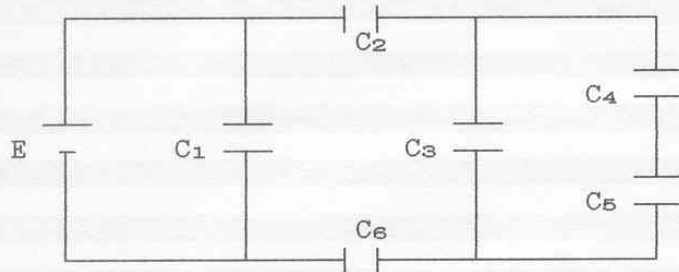
$$Q_3 = C_3 * V_3 = 50 \cdot 10^{-6} * 54,55 = 2727,5 \mu\text{C}$$

$$Q_4 = Q_5 = Q_{45} = C_{45} * V_{45} = 20 \cdot 10^{-6} * 54,55 = 1091 \mu\text{C}$$

$$V_4 = V_5 = \frac{Q_4}{C_4} = \frac{1091 \cdot 10^{-6}}{40 \cdot 10^{-6}} = 27,275 \text{ V}$$

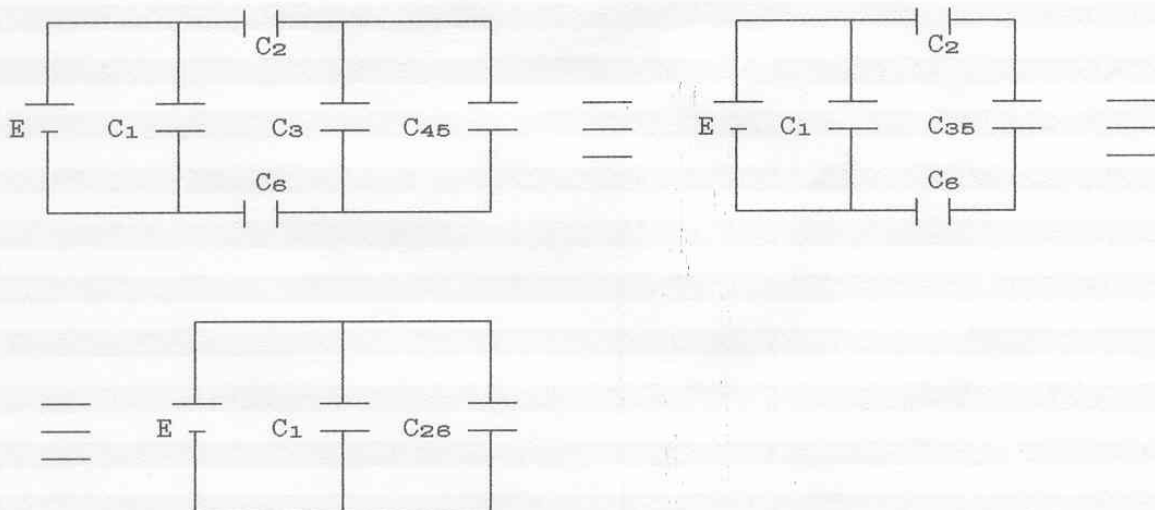
2.20 - Del circuito di figura determinare:

- 1.- la capacità totale;
- 2.- la carica complessivamente erogata dal generatore;
- 3.- la carica e la differenza di potenziale su ogni capacità.



$$\begin{aligned}
 E &= 100 \text{ V} & ; & & C_1 &= 20 \text{ } \mu\text{F} \\
 C_2 &= 30 \text{ } \mu\text{F} & ; & & C_3 &= 22 \text{ } \mu\text{F} \\
 C_4 &= 180 \text{ } \mu\text{F} & ; & & C_5 &= 20 \text{ } \mu\text{F} \\
 C_6 &= 10 \text{ } \mu\text{F}
 \end{aligned}$$

1.-



$$C_{45} = \frac{C_4 * C_5}{C_4 + C_5} = \frac{180 * 10^{-6} * 20 * 10^{-6}}{180 * 10^{-6} + 20 * 10^{-6}} = 18 \text{ } \mu\text{F}$$

$$C_{35} = C_3 + C_{45} = 22 * 10^{-6} + 18 * 10^{-6} = 40 \text{ } \mu\text{F}$$

$$C_{26} = \frac{1}{\frac{1}{C_2} + \frac{1}{C_{35}} + \frac{1}{C_6}} = \frac{1}{\frac{1}{30 * 10^{-6}} + \frac{1}{40 * 10^{-6}} + \frac{1}{10 * 10^{-6}}} = 6,32 \text{ } \mu\text{F}$$

$$C_T = C_1 + C_{26} = 20 * 10^{-6} + 6,32 * 10^{-6} = 26,32 \text{ } \mu\text{F}$$

2.-

$$Q_T = C_T * E = 26,32 \cdot 10^{-6} * 100 = 2632 \mu\text{C}$$

3.-

$$V_1 = E = 100 \text{ V}$$

$$Q_1 = C_1 * V_1 = 20 \cdot 10^{-6} * 100 = 2000 \mu\text{C}$$

$$Q_2 = Q_6 = Q_{35} = Q_T - Q_1 = 2632 \cdot 10^{-6} - 2000 \cdot 10^{-6} = 632 \mu\text{C}$$

$$V_2 = \frac{Q_2}{C_2} = \frac{632 \cdot 10^{-6}}{30 \cdot 10^{-6}} = 21 \text{ V}$$

$$V_6 = \frac{Q_6}{C_6} = \frac{632 \cdot 10^{-6}}{10 \cdot 10^{-6}} = 63,2 \text{ V}$$

$$V_3 = V_{45} = V_{35} = \frac{Q_{35}}{C_{35}} = \frac{632 \cdot 10^{-6}}{40 \cdot 10^{-6}} = 15,8 \text{ V}$$

$$Q_3 = C_3 * V_3 = 22 \cdot 10^{-6} * 15,8 = 347,6 \mu\text{C}$$

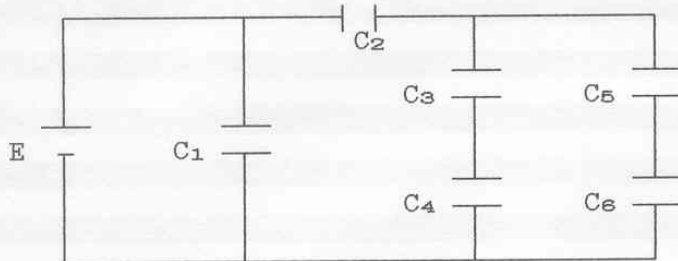
$$Q_4 = Q_5 = Q_{45} = C_{45} * V_{45} = 18 \cdot 10^{-6} * 15,8 = 284,4 \mu\text{C}$$

$$V_4 = \frac{Q_4}{C_4} = \frac{284,4 \cdot 10^{-6}}{180 \cdot 10^{-6}} = 1,58 \text{ V}$$

$$V_5 = \frac{Q_5}{C_5} = \frac{284,4 \cdot 10^{-6}}{20 \cdot 10^{-6}} = 14,22 \text{ V}$$

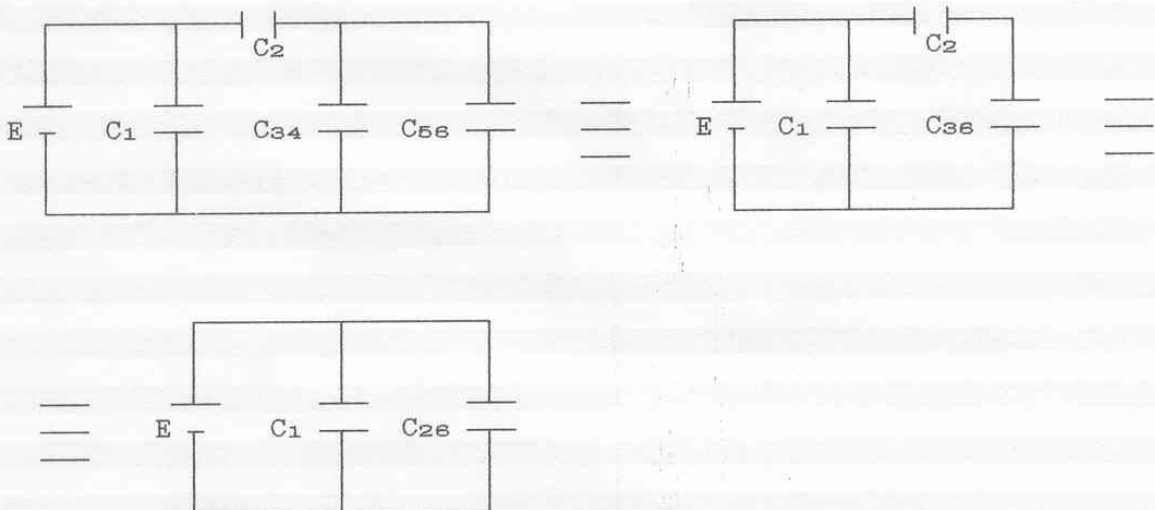
2.21 - Del circuito di figura determinare:

- 1.- la capacità totale;
- 2.- la carica complessivamente erogata dal generatore;
- 3.- la carica e la differenza di potenziale su ogni capacità.



$$\begin{aligned}
 E &= 100 \text{ V} & ; & & C_1 &= 12 \text{ } \mu\text{F} \\
 C_2 &= 30 \text{ } \mu\text{F} & ; & & C_3 &= 180 \text{ } \mu\text{F} \\
 C_4 &= 20 \text{ } \mu\text{F} & ; & & C_5 &= 60 \text{ } \mu\text{F} \\
 C_6 &= 60 \text{ } \mu\text{F}
 \end{aligned}$$

1.-



$$C_{56} = \frac{C_5 * C_6}{C_5 + C_6} = \frac{C_5}{2} = \frac{60 * 10^{-6}}{2} = 30 \text{ } \mu\text{F}$$

$$C_{34} = \frac{C_3 * C_4}{C_3 + C_4} = \frac{180 * 10^{-6} * 20 * 10^{-6}}{180 * 10^{-6} + 20 * 10^{-6}} = 18 \text{ } \mu\text{F}$$

$$C_{36} = C_{34} + C_{56} = 18 * 10^{-6} + 30 * 10^{-6} = 48 \text{ } \mu\text{F}$$

$$C_{26} = \frac{C_2 * C_{36}}{C_2 + C_{36}} = \frac{30 * 10^{-6} * 48 * 10^{-6}}{30 * 10^{-6} + 48 * 10^{-6}} = 18,46 \text{ } \mu\text{F}$$

$$C_T = C_1 + C_{26} = 12 \cdot 10^{-6} + 18,46 \cdot 10^{-6} = 30,46 \mu\text{F}$$

2.-

$$Q_T = C_T \cdot E = 30,46 \cdot 10^{-6} \cdot 100 = 3046 \mu\text{C}$$

3.-

$$V_1 = E = 100 \text{ V}$$

$$Q_1 = C_1 \cdot V_1 = 12 \cdot 10^{-6} \cdot 100 = 1200 \mu\text{C}$$

$$Q_2 = Q_{36} = Q_T - Q_1 = 3046 \cdot 10^{-6} - 1200 \cdot 10^{-6} = 1846 \mu\text{C}$$

$$V_2 = \frac{Q_2}{C_2} = \frac{1846 \cdot 10^{-6}}{30 \cdot 10^{-6}} = 61,54 \text{ V}$$

$$V_{36} = V_{34} = V_{56} = E - V_1 = 100 - 61,53 = 38,47 \text{ V}$$

$$Q_3 = Q_4 = Q_{34} = C_{34} \cdot V_{34} = 18 \cdot 10^{-6} \cdot 38,47 = 692,46 \mu\text{C}$$

$$V_3 = \frac{Q_3}{C_3} = \frac{692,46 \cdot 10^{-6}}{180 \cdot 10^{-6}} = 3,85 \text{ V}$$

$$V_4 = \frac{Q_4}{C_4} = \frac{692,46 \cdot 10^{-6}}{20 \cdot 10^{-6}} = 34,62 \text{ V}$$

$$Q_5 = Q_6 = Q_{56} = C_{56} \cdot V_{56} = 30 \cdot 10^{-6} \cdot 38,47 = 1154 \mu\text{C}$$

$$V_5 = V_6 = \frac{Q_5}{C_5} = \frac{1154 \cdot 10^{-6}}{60 \cdot 10^{-6}} = 19,23 \text{ V}$$